



**Staff Selection Commission**  
(Government Of India)

**REGISTRATION NUMBER :**  
**EXAM DATE : 21-August-2017**  
**EXAM NAME : SSC Examination**  
**TOTAL MARKS : 200**

**CANDIDATE NAME :**  
**EXAM START TIME : 10:00:00**  
**EXAM DURATION : 01:00 Hrs**  
**TOTAL NO OF QUESTIONS : 100**

**QID : 1** - Select the related word from the given alternatives.

**Cow : Calf :: Hen : ?**

दिए गए विकल्पों में से संबंधित शब्द को चुनिए।

**गाय : बछड़ा :: मुर्गी : ?**

**Options:**

1) Chick

चूज़ा

2) Cock

मुर्गी

3) Egg

अंडा

4) Fly

मक्खी

**Correct Answer:** Chick

चूज़ा

**Candidate Answer:** Chick

चूज़ा

**QID : 2** - Select the related letters from the given alternatives.

**DHL : AEI :: QUY : ?**

दिए गए विकल्पों में से संबंधित अक्षरों को चुनिए।

**DHL : AEI :: QUY : ?**

**Options:**

1) MQU

2) NRV

3) OSW

4) PTX

**Correct Answer:** NRV

**Candidate Answer:** NRV

**QID : 3** - Select the related number from the given alternatives.

**0.5 : 2 :: 0.125 : ?**

दिए गए विकल्पों में से संबंधित संख्या को चुनिए।

**0.5 : 2 :: 0.125 : ?**

**Options:**

1) 6

2) 16

3) 8

4) 12

**Correct Answer:** 8

**Candidate Answer:** 8

**QID : 4** - Select the odd word from the given alternatives.

दिए गए विकल्पों में से विषम शब्द को चुनिए।

**Options:**

1) Book

पुस्तक

2) Page

पन्ना

3) Pen

कलम

4) Diary

डायरी

**Correct Answer:** Pen

कलम

**Candidate Answer:** Pen

कलम

**QID : 5** - Select the odd letters from the given alternatives.

दिए गए विकल्पों में से विषम अक्षरों को चुनिए।

**Options:**

1) EGI

2) MOQ

3) UWY

4) NLJ

**Correct Answer:** NLJ

**Candidate Answer:** NLJ

**QID : 6** - Select the odd number from the given alternatives.

दिए गए विकल्पों में से विषम संख्या को चुनिए।

**Options:**

1) 47

2) 41

3) 59

4) 63

**Correct Answer:** 63

**Candidate Answer:** 63

**QID : 7** - A series is given, with one word missing. Choose the correct alternative from the given ones that will complete the series as per dictionary.

?, Lifelike, Lifeline, Lifelong

एक अनुक्रम दिया गया है, जिसमें एक शब्द लुप्त है। दिए गए विकल्पों में से वह सही विकल्प चुनिए जो अनुक्रम को पूरा करे शब्दकोश के अनुसार।

?, Lifelike, Lifeline, Lifelong

**Options:**

1) Lifeless

2) Lifespan

3) Lifelost

4) Lifework

**Correct Answer:** Lifeless

**Candidate Answer:** Lifeless

**QID : 8** - A series is given, with one term missing. Choose the correct alternative from the given ones that will complete the series.

B, C, E, H, L, ?

एक अनुक्रम दिया गया है, जिसमें एक पद लुप्त है। दिए गए विकल्पों में से वह सही विकल्प चुनिए जो अनुक्रम को पूरा करे।

B, C, E, H, L, ?

**Options:**

1) Q

2) N

3) O

4) P

**Correct Answer:** Q

**Candidate Answer:** Q

**QID : 9** - A series is given, with one number missing. Choose the correct alternative from the given ones that will complete the series.

**-4, ?, 3, 8, 14, 21**

एक अनुक्रम दिया गया है, जिसमें एक संख्या लुप्त है। दिए गए विकल्पों में से वह सही विकल्प चुनिए जो अनुक्रम को पूरा करे।

**-4, ?, 3, 8, 14, 21**

**Options:**

1) 0

2) 1

3) -2

4) -1

**Correct Answer:** -1

**Candidate Answer:** -1

**QID : 10** - Meetu's birthday is on Wednesday 8<sup>th</sup> March. On what day of the week will be Ritu's Birthday in the same year if Ritu was born on 10<sup>th</sup> July?

मीतू का जन्मदिन 8 मार्च बुधवार को है। उसी वर्ष ऋतु का जन्मदिन सप्ताह के किस दिन को आएगा यदि ऋतु का जन्म 10 जुलाई को हुआ है?

**Options:**

1) Monday

सोमवार

2) Wednesday

बुधवार

3) Friday

शुक्रवार

4) Saturday

शनिवार

**Correct Answer:** Monday

सोमवार

**Candidate Answer:** Monday

सोमवार

**QID : 11** - The weights of 4 boxes are 30, 40, 50 and 80 kilograms. Which of the following cannot be the total weight, in kilograms, of any combination of these boxes and in a combination a box can be used only once?

चार बक्सों का वजन 30, 40, 50 और 80 किलोग्राम है। निम्नलिखित में से बक्सों के किसी भी संयोजन से कुल वजन, किलोग्राम में कौन सा नहीं हो सकता है और एक संयोजन में एक बक्सा एक ही बार प्रयोग में लाया जा सकता है?

**Options:**

1) 120

2) 110

3) 100

4) 130

**Correct Answer:** 100

**Candidate Answer:** 100

**QID : 12** - From the given alternative words, select the word which cannot be formed using the letters of the given word:

**DUPLICATE**

निम्नलिखित विकल्पों में से वह शब्द चुनिए जो दिए गए शब्द के अक्षरों का प्रयोग करके नहीं बनाया जा सकता:

**DUPLICATE**

**Options:**

1) PLATE

2) DUCTILE

3) LUCID

4) TEAM

**Correct Answer:** TEAM

**Candidate Answer:** TEAM

**QID : 13** - If **PRIMATE** is coded as **MOFJXQB**, then how will **COW** be coded as?

यदि **PRIMATE** को किसी कोड में **MOFJXQB** लिखा जाता है, तो **COW** को उसी कोड में क्या लिखा जाएगा?

**Options:**

1) ZLT

2) EDC

3) RFV

4) TGB

**Correct Answer:** ZLT

**Candidate Answer:** ZLT

**QID : 14** - In a certain code language, '+' represents 'x', '-' represents '+', 'x' represents '÷' and '÷' represents '-'. What is the answer to the following question?

**11 + 50 - 150 ÷ 200 = ?**

किसी कोड भाषा में, '+' का मतलब 'x' है, '-' का मतलब '+' है, 'x' का मतलब '÷' है और '÷' का मतलब '-' है। निम्नलिखित प्रश्न का उत्तर क्या है?

**11 + 50 - 150 ÷ 200 = ?**

**Options:**

1) 200

2) 500

3) 250

4) 50

**Correct Answer:** 500

**Candidate Answer:** 500

**QID : 15** - If  $7x1=12$ ;  $5x4=2$ ;  $6x4=4$ ; then what is the value of  $7x4 = ?$

यदि  $7x1=12$ ;  $5x4=2$ ;  $6x4=4$ ; तो  $7x4 = ?$  का मान ज्ञात कीजिये।

**Options:**

1) 8

2) 6

3) 11

4) 28

**Correct Answer:** 6

**Candidate Answer:** 6

**QID : 16** -

Select the missing number from the given responses:

दिए गए विकल्पों में से लुप्त संख्या चुनिए।

18	90	5
13	143	11
7	?	5

**Options:**

1) 12

2) 2

3) 53

4) 35

**Correct Answer:** 35

**Candidate Answer:** 35

**QID : 17** - A man cycles 7 km East, then turns South and cycles 12 km, then turns West and cycles 7 km, then turns to his left and cycles 10 km. Where is he now with reference to his starting position?

एक व्यक्ति 7 कि.मी. पूर्व की ओर साइकिल चलाता है, फिर दक्षिण की ओर मुड़कर 12 कि.मी. साइकिल चलाता है, फिर पश्चिम की ओर मुड़कर 7 कि.मी. साइकिल चलाता है और फिर अपनी बाईं ओर मुड़कर 10 कि.मी. साइकिल चलाता है। वह अपनी प्रारंभिक स्थिति से अब कहां है?

**Options:**

1) 22 Kms South

22 कि.मी. दक्षिण

2) 2 Kms South

2 कि.मी. दक्षिण

3) 22 Kms East

22 कि.मी. पूर्व

4) 2 Kms East

2 कि.मी. पूर्व

**Correct Answer:** 22 Kms South

22 कि.मी. दक्षिण

**Candidate Answer:** 22 Kms South

22 कि.मी. दक्षिण

**QID : 18** - In the question two statements are given, followed by two conclusions, I and II. You have to consider the statements to be true even if it seems to be at variance from commonly known facts. You have to decide which of the given conclusions, if any, follows from the given statements.

**Statement 1** : All steel is iron.

**Statement 2** : No iron is solid.

**Conclusion I** : No steel is solid.

**Conclusion II** : Some iron is steel.

प्रश्न में दो कथन दिये गये हैं जिसके आगे दो निष्कर्ष I और II निकाले गये हैं। आपको मानना है कि दोनों कथन सत्य हैं चाहे वह सामान्यतः ज्ञात तथ्यों से भिन्न प्रतीत होते हों। आपको निर्णय करना है कि दिए गए निष्कर्षों में से कौन-सा/कौन-से निश्चित रूप से कथन द्वारा सही निकाला जा सकता है/सकते हैं, यदि कोई हो।

**कथन 1:** सभी स्टील लोहा है।

**कथन 2:** कोई लोहा ठोस नहीं है।

**निष्कर्ष I** : कोई स्टील ठोस नहीं है।

**निष्कर्ष II** : कुछ लोहा स्टील है।

**Options:**

1) Only conclusion I follows

केवल निष्कर्ष I सही है

2) Only conclusion II follows

केवल निष्कर्ष II सही है

3) Both I and II follow

दोनों निष्कर्ष I और II सही हैं

4) Neither I nor II follows

ना तो निष्कर्ष I सही है ना ही निष्कर्ष II

**Correct Answer:** Both I and II follow

दोनों निष्कर्ष I और II सही हैं

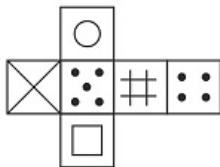
**Candidate Answer:** Both I and II follow

दोनों निष्कर्ष I और II सही हैं

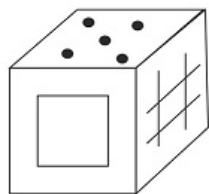
**QID : 19** -

Which of the following cube in the answer figure cannot be made based on the unfolded cube in the question figure?

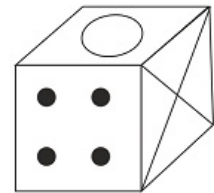
निम्नलिखित उत्तर आकृति में से कौन सा घन दिए गए प्रश्न आकृति में से खुले घन से बनाया नहीं जा सकता?



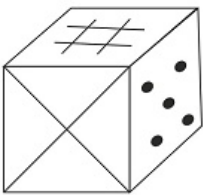
Options:  
1)



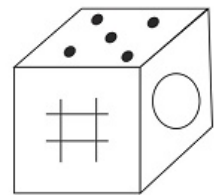
2)



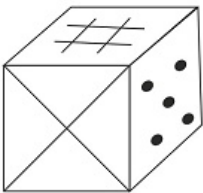
3)



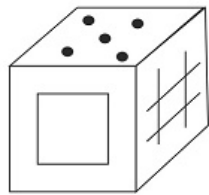
4)



Correct Answer:



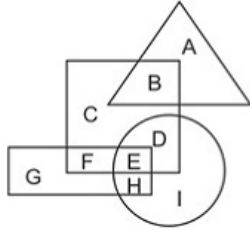
Candidate Answer:



QID : 20 -

In the following figure, square represents athletes, triangle represents engineers, circle represents fathers and rectangle represents entrepreneurs. Which set of letters represents athletes who are either entrepreneurs or fathers?

निम्नलिखित आकृति में, वर्ग एथलीट्स को दर्शाता है, त्रिभुज इंजीनियर्स को दर्शाता है, वृत्त पिताओं को दर्शाता है और आयत उद्यमियों को दर्शाता है। अक्षरों का कौन सा समूह उन एथलीट्स को दर्शाता है जो या तो उद्यमी हैं या पिता हैं?



Options:

- 1) F,E,D
- 2) D,E,F,G,H,I
- 3) G,H,I
- 4) E,H

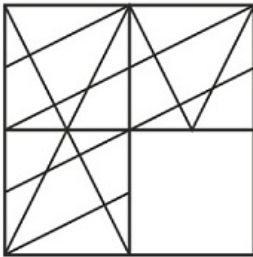
Correct Answer: F,E,D

Candidate Answer: F,E,D

QID : 21 -

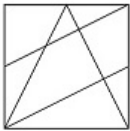
Which answer figure will complete the pattern in the question figure?

निम्नलिखित में से कौन-सी उत्तर आकृति प्रश्न आकृति के प्रतिरूप को पूरा करेगी?



Options:

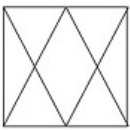
1)



2)



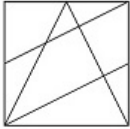
3)



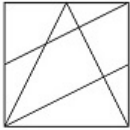
4)



**Correct Answer:**



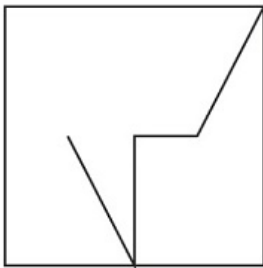
**Candidate Answer:**



**QID : 22 -**

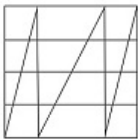
From the given answer figures, select the one in which the question figure is hidden/embedded.

दी गई उत्तर आकृतियों में से उस आकृति को चुनिए जिसमें प्रश्न आकृति निहित है।

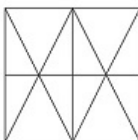


**Options:**

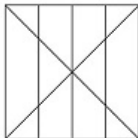
1)



2)



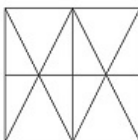
3)



4)

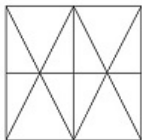


**Correct Answer:**





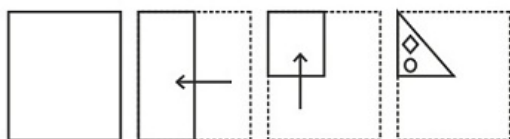
Candidate Answer:



QID : 23 -

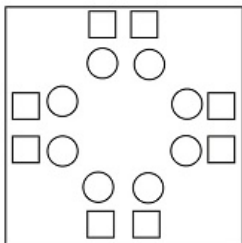
A piece of paper is folded and punched as shown below in the question figures. From the given answer figures, indicate how it will appear when opened.

प्रश्न आकृतियों में दिखाए अनुसार कागज को मोड़कर उसमें छेद करने तथा खोलने के बाद वह किस उत्तर आकृति जैसा दिखाई देगा?

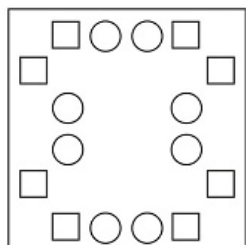


Options:

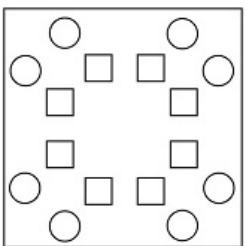
1)



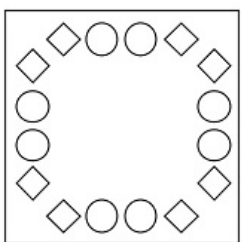
2)



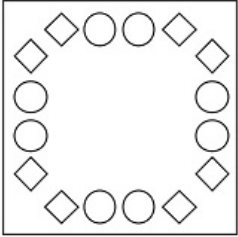
3)



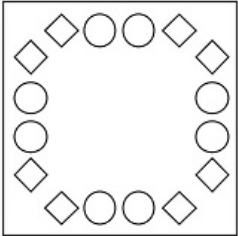
4)



**Correct Answer:**



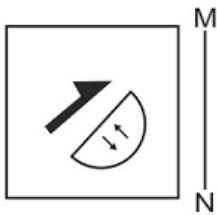
**Candidate Answer:**



**QID : 24 -**


If a mirror is placed on the line MN, then which of the answer figures is the right image of the given figure?

यदि एक दर्पण को MN रेखा पर रखा जाए तो दी गई उत्तर आकृतियों में से कौन-सी आकृति प्रश्न आकृति का सही प्रतिबिम्ब होगी?




Options:


1)




2)



3)



4)



Correct Answer:



Candidate Answer:



**QID : 25 -**

A word is represented by only one set of numbers as given in any one of the alternatives. The sets of numbers given in the alternatives are represented by two classes of alphabets as shown in the given two matrices. The columns and rows of Matrix-I are numbered from 0 to 4 and that of Matrix-II are numbered from 5 to 9. A letter from these matrices can be represented first by its row and next by its column, for example 'Y' can be represented by 55, 87 etc and 'Z' can be represented by 14, 01 etc. Similarly, you have to identify the set for the word 'VERY'.

एक शब्द केवल एक संख्या-समूह द्वारा दर्शाया गया है, जैसा कि विकल्पों में से किसी एक में दिया गया है। विकल्पों में दिए गए संख्या-समूह अक्षरों के दो वर्गों द्वारा दर्शाए गए हैं, जैसा कि दिए गए दो आव्यूहों में है। आव्यूह-I के स्तम्भ और पंक्ति की संख्या 0 से 4 और आव्यूह-II की 5 से 9 है। इन आव्यूहों से एक अक्षर को पहले उसकी पंक्ति और बाद में स्तम्भ संख्या द्वारा दर्शाया जा सकता है। उदाहरण के लिए 'Y' को 55, 87 आदि द्वारा दर्शाया जा सकता है तथा 'Z' को 14, 01 आदि द्वारा दर्शाया जा सकता है। इसी तरह से आपको प्रश्न में दिए शब्द 'VERY' के लिए समूह को पहचानना है।

Matrix I आव्यूह - I					
	0	1	2	3	4
0	W	Z	G	T	D
1	S	R	W	G	Z
2	X	F	S	D	E
3	Q	V	C	S	F
4	A	T	Q	Q	A

Matrix II आव्यूह - II					
	5	6	7	8	9
5	Y	N	L	I	Y
6	H	I	P	J	I
7	B	K	O	N	O
8	U	M	Y	B	P
9	J	O	H	L	K

**Options:**

1) 01,43,21,78

2) 31,24,11,87

3) 11,20,66,85

4) 88,56,43,20

**Correct Answer:** 31,24,11,87**Candidate Answer:** 31,24,11,87

**QID : 26 -** The demand for a inferior good decreases with \_\_\_\_\_ in the consumer's income.

किसी निम्नस्तरीय वस्तु की मांग में गिरावट, उपभोक्ता की आय में \_\_\_\_\_ के साथ होती है।

**Options:**

1) increase

वृद्धि

2) decrease

गिरावट

3) constant

स्थिर

4) double

दुगना

**Correct Answer:** increase

वृद्धि

**Candidate Answer:** [ NOT ANSWERED ]

**QID : 27 -** Goods for which the quantity that a consumer chooses, increases as the consumer's income increases and decreases as the income decreases are called?

अधिकार वस्तु जिनका चयन उपभोक्ता करता है, उसकी मात्रा में वृद्धि होती है, जब उपभोक्ता की आय में वृद्धि होती है और वस्तु की मात्रा में कमी आती है जब उपभोक्ता की आय में कमी आती है, क्या कहलाती हैं?

**Options:**

1) Inferior goods

निम्नस्तरीय वस्तुएं

2) Normal goods

सामान्य वस्तुएं

3) Complementary goods

पूरक वस्तुएं

4) Substitute goods

स्थानापन्न वस्तुएं

**Correct Answer:** Normal goods

सामान्य वस्तुएं

**Candidate Answer:** [ NOT ANSWERED ]

**QID : 28** - "Prevention of cruelty to animals" is listed in the \_\_\_\_\_ list given in the Seventh Schedule in the Constitution of India.

"पशुओं के प्रति क्रूरता की रोकथाम" भारत के संविधान की सातवीं अनुसूची में दी गयी \_\_\_\_\_ सूची में सूचीबद्ध है।

**Options:**

1) Union

केंद्रीय

2) State

राज्य

3) Global

विश्व

4) Concurrent

समवर्ती

**Correct Answer:** Concurrent

समवर्ती

**Candidate Answer:** Concurrent

समवर्ती

**QID : 29** - \_\_\_\_\_ makes laws on matters included in Union List and Concurrent List.

\_\_\_\_\_ संघ सूची और समवर्ती सूची के विषयों पर कानून बनाती है।

**Options:**

1) Lok Sabha

लोक सभा

2) Ministry of Defence

रक्षा मंत्रालय

3) Prime Minister's Office

प्रधानमन्त्री कार्यालय

4) Securities and Exchange Board of India

भारतीय प्रतिभूति और विनिमय बोर्ड

**Correct Answer:** Lok Sabha

लोक सभा

**Candidate Answer:** Lok Sabha

लोक सभा

**QID : 30** - According to the categories of land mentioned in the Chola inscriptions \_\_\_\_\_ was known as the land for the maintenance of schools?

चोल अभिलेखों में उल्लेखित भूमि की विभिन्न कोटियों के अनुसार \_\_\_\_\_ को किसी विद्यालय के रखरखाव की भूमि कहा जाता था।

**Options:**

1) Vellanvagai

वेल्लनवगाई

2) Brahmadeya

ब्रह्मदेय

3) Shalabhoga

शालाभोग

4) Devadana

देवदान

**Correct Answer:** Shalabhoga

शालाभोग

**Candidate Answer:** [ NOT ANSWERED ]

**QID : 31** - Prince Salim was the name of the future Emperor \_\_\_\_\_.

राजकुमार सलीम आगे चलकर सम्राट \_\_\_\_\_ कहलाया।

**Options:**

1) Babur

बाबर

2) Humayun

हुमायूँ

3) Jahangir

जहांगीर

4) Akbar

अकबर

**Correct Answer:** Jahangir

जहांगीर

**Candidate Answer:** Jahangir

जहांगीर

**QID : 32** - \_\_\_\_\_ is the breaking up of the rocks on the earth's surface.

पृथ्वी की सतह पर शैलों के टूटने से \_\_\_\_\_ की क्रिया होती है।

**Options:**

1) Erosion

अपरदन

2) Weathering

अपक्षय

3) Attrition

संघर्षण

4) Abrasion

अपघर्षण

**Correct Answer:** Weathering

अपक्षय

**Candidate Answer:** Weathering

अपक्षय

**QID : 33** - The method of soil conservation in the coastal and dry regions where rows of trees are planted to check the wind movement to protect soil cover is called?

मृदा संरक्षण की उस विधि को क्या कहते हैं जिसमें तटीय प्रदेशों और शुष्क प्रदेशों में पवन गति को रोकने के लिए वृक्ष कतारों में लगाए जाते हैं ताकि मृदा आवरण को बचाया जा सके?

**Options:**

1) Mulching

मलच बनाना

2) Contour barriers

समोच्चरेखीय रोधिकाएं

3) Rock dam

चट्टान बांध

4) Shelter belts

रक्षक मेखलाएं

**Correct Answer:** Shelter belts

रक्षक मेखलाएं

**Candidate Answer:** Shelter belts

रक्षक मेखलाएं

**QID : 34** - Biological names are generally derived from which language?

जैविक नाम प्रायः किस भाषा से प्राप्त होते हैं?

**Options:**

1) French

फ्रांसीसी

2) Latin

लैटिन

3) Mexican

मेक्सिकैन

4) German

जर्मन

**Correct Answer:** Latin

लैटिन

**Candidate Answer:** Latin

लैटिन

**QID : 35** - The members of rhodophyceae are commonly called \_\_\_\_\_ algae.

रोडोफाइसी के सदस्यों को प्रायः \_\_\_\_\_ शैवाल कहते हैं।

**Options:**

1) Green

हरा

2) Brown

भूरा

3) Red

लाल

4) Yellow

पीला

**Correct Answer:** Red

लाल

**Candidate Answer:** [ NOT ANSWERED ]

**QID : 36** - Aurelia (Medusa) and Adamsia (Polyp) are examples of which Phylum?

ओरेलिया (मेडूसा) और एडमसिया (पालिप) किस संघ के उदाहरण हैं?

**Options:**

- 1) Ctenophora  
टीनोफोरा  
2) Annelida  
ऐनेलिडा  
3) Coelenterata  
सिलेन्ट्रेटा  
4) Aschelminthes  
एस्केलमिन्थीज़

**Correct Answer:** Coelenterata  
सिलेन्ट्रेटा

**Candidate Answer:** [ NOT ANSWERED ]

**QID : 37** - Energy in the form of heat is wasted when a machine is operated. This heat is generated due to \_\_\_\_\_.

जब हम किसी मशीन का उपयोग करते हैं, तो घर्षण से उत्पन्न ऊष्मा नष्ट हो जाती है। यह ऊष्मा \_\_\_\_\_ के कारण उत्पन्न होती है।

**Options:**

- 1) burning  
जलना  
2) friction  
घर्षण  
3) combustion  
दहन  
4) lubrication  
उप्स्नेहन

**Correct Answer:** friction  
घर्षण

**Candidate Answer:** friction  
घर्षण

**QID : 38** - The incident ray, the \_\_\_\_\_ at the point of incidence and the reflected ray all lie in the same plane.

आपतित किरण, आपतन बिंदु पर \_\_\_\_\_ और परावर्तित किरण सभी एक तल में होते हैं।

**Options:**

- 1) surface  
पृष्ठ  
2) tangent  
स्पर्श-रेखा  
3) normal  
अभिलम्ब  
4) angle of reflection  
परावर्तन कोण

**Correct Answer:** normal  
अभिलम्ब

**Candidate Answer:** normal  
अभिलम्ब

**QID : 39** - In Microsoft Word, \_\_\_\_\_ allows us to move selected paragraphs to the right.

माइक्रोसॉफ्ट वर्ड में, \_\_\_\_\_ हमें चुने गए पैराग्राफ को दाईं ओर खिसकाने की अनुमति देता है।

**Options:**

- 1) Decrease Indent  
डीक्रीज इंडेंट  
2) Increase Indent  
इनक्रीज इंडेंट  
3) Double Indent  
दोगुना इंडेंट  
4) Single Indent  
एकल इंडेंट

**Correct Answer:** Increase Indent  
इनक्रीज इंडेंट

**Candidate Answer:** Double Indent  
दोगुना इंडेंट

**QID : 40** - Blue Vitriol is another name for which of the following?

निम्नलिखित में से तृतीया किसका अन्य नाम है?

**Options:**

1) Copper Sulphate

कॉपर सल्फेट

2) Oxygen

ऑक्सीजन

3) Copper

कॉपर

4) Magnesium Oxide

मैग्नीशियम ऑक्साइड

**Correct Answer:** Copper Sulphate

कॉपर सल्फेट

**Candidate Answer:** Magnesium Oxide

मैग्नीशियम ऑक्साइड

**QID : 41** - The rubbing surface of a matchbox has powdered glass and a little red \_\_\_\_\_.

माचिस की रगड़ने वाली सतह पर चूर्णित कांच और थोड़ा लाल \_\_\_\_\_ लगाते हैं।

**Options:**

1) antimony

एन्टिमनी

2) arsenic

आर्सेनिक

3) silicon

सिलिकॉन

4) phosphorus

फॉस्फोरस

**Correct Answer:** phosphorus

फॉस्फोरस

**Candidate Answer:** phosphorus

फॉस्फोरस

**QID : 42** - A few organisms can tolerate and thrive in a wide range of temperatures. Such organisms are called \_\_\_\_\_.

कुछ जीव तापमानों के व्यापक परास (चरम) सहन कर सकते हैं और उसमें खूब बढ़ते हैं। ये \_\_\_\_\_ कहलाते हैं।

**Options:**

1) Osmotic

परासरणी

2) Eurythermal

पृथुताजापी

3) Stenothermal

तनुतापी

4) Hydrothermal

उष्णजलीय

**Correct Answer:** Eurythermal

पृथुताजापी

**Candidate Answer:** Stenothermal

तनुतापी

**QID : 43** - \_\_\_\_\_ scheme by the Central Government will strengthen the bond between all the states, regions, and districts of India.

केंद्र सरकार द्वारा शुरू की गयी \_\_\_\_\_ योजना का उद्देश्य भारत के सभी राज्यों, क्षेत्रों और जिलों के बीच संबंधों को मज़बूत करना है।

**Options:**

1) Uday Desh Ka Aam Nagrik

उदय देश का आम नागरिक

2) Urja Ganga

उर्जा गंगा

3) Ek Bharat Shrestha Bharat

एक भारत श्रेष्ठ भारत

4) Namami Ganga Yojana

नमामि गंगा योजना

**Correct Answer:** Ek Bharat Shrestha Bharat

एक भारत श्रेष्ठ भारत

**Candidate Answer:** Ek Bharat Shrestha Bharat

एक भारत श्रेष्ठ भारत

**QID : 44** - Who invented Velcro?

वेलक्रो का आविष्कार किसने किया?



**Options:**

- 1) Thomas Edison  
थॉमस एडिसन
- 2) William Harvey  
विलियम हार्वे
- 3) George de Mestral  
जॉर्ज दे मेस्त्रल
- 4) Robert Boyles  
रॉबर्ट बॉयल्स

**Correct Answer:** George de Mestral  
जॉर्ज दे मेस्त्रल

**Candidate Answer:** George de Mestral  
जॉर्ज दे मेस्त्रल

**QID : 45** - Which nation will host the FIFA Men's World Cup to be held in the year 2018?

वर्ष 2018 में होने वाले फीफा विश्व कप (पुरुष) की मेजबानी कौन सा देश करेगा?

**Options:**

- 1) Japan  
जापान
- 2) South Korea  
दक्षिण कोरिया
- 3) China  
चीन
- 4) Russia  
रूस

**Correct Answer:** Russia  
रूस

**Candidate Answer:** Japan  
जापान

**QID : 46** - Charminar was built by?

चारमीनार का निर्माण किसने किया था?

**Options:**

- 1) Humayun  
हुमायूँ
- 2) Mohammed Quli Qutab Shah  
मोहम्मद कुली कुतुब शाह
- 3) Ashoka  
अशोक
- 4) Narasimha  
नरसिंह

**Correct Answer:** Mohammed Quli Qutab Shah  
मोहम्मद कुली कुतुब शाह

**Candidate Answer:** Mohammed Quli Qutab Shah  
मोहम्मद कुली कुतुब शाह

**QID : 47** - Which of the following is an Indian military decoration awarded for valour, courageous action or self-sacrifice away from the battlefield?

भारतीय सेना द्वारा निम्नलिखित में से कौन सा पदक युद्ध क्षेत्र से दूर बहादुरी, साहसपूर्ण कार्यवाई या आत्म-त्याग के लिए प्रदान किया जाता है?

**Options:**

- 1) Ashok Chakra  
अशोक चक्र
- 2) Dada Saheb Phalke Awards  
दादा साहेब फाल्के पुरस्कार
- 3) Arjuna Award  
अर्जुन पुरस्कार
- 4) Padma Shri  
पद्म श्री

**Correct Answer:** Ashok Chakra  
अशोक चक्र

**Candidate Answer:** Ashok Chakra  
अशोक चक्र

**QID : 48** - Which of the statements given below are correct?

1. The author of the novel 'Accelerando' is Charles Stross.
2. The author of the novel 'The Windup Girl' is Paolo Bacigalupi.
3. The author of the novel 'The Devil in Silver' is Josh Malerman.

निचे दिये गये कथनों में से कौन से कथन सही हैं?

1. उपन्यास 'एक्सलेरेंडो' के लेखक चार्ल्स स्ट्रोस हैं।
2. उपन्यास 'द वाइंडअप गर्ल' के लेखक पाओलो बैकीगलुपी हैं।
3. उपन्यास 'द डेविल इन सिल्वर' के लेखक जोश मलेर्मन हैं।

**Options:**

- 1) 1 and 2  
1 और 2
- 2) 2 and 3  
2 और 3
- 3) 1 and 3  
1 और 3
- 4) 1, 2 and 3  
1, 2 और 3

**Correct Answer:** 1 and 2

1 और 2

**Candidate Answer:** [ NOT ANSWERED ]

**QID : 49** - In March 2017, in which country was "world's largest artificial sun" switched on?

मार्च 2017 में, किस देश में "दुनिया का सबसे बड़ा कृत्रिम सूरज" विकसित किया था?

**Options:**

- 1) China  
चीन
- 2) USA  
यूएसए
- 3) Germany  
जर्मनी
- 4) Russia  
रूस

**Correct Answer:** Germany

जर्मनी

**Candidate Answer:** [ NOT ANSWERED ]

**QID : 50** - With which other country does Bangladesh share its border besides India?

भारत के अलावा बांग्लादेश अपनी सीमा को किस देश के साथ साझा करता है?

**Options:**

- 1) China  
चीन
- 2) Laos  
लाओस
- 3) Bhutan  
भूटान
- 4) Myanmar  
म्यान्मार

**Correct Answer:** Myanmar

म्यान्मार

**Candidate Answer:** Myanmar

म्यान्मार

**QID : 51** - What least number must be added to 329, so that the sum is completely divisible by 7?

329 में कौनसी न्यूनतम संख्या को जोड़ा जाना चाहिए, ताकि राशि 7 से पूर्णतः विभाज्य हो।

**Options:**

- 1) 1
- 2) 0
- 3) 2
- 4) 3

**Correct Answer:** 0

**Candidate Answer:** 0

**QID : 52** - A can do a work in 15 days and B in 30 days. If they work on it together, then in how many days will they be able to do 50% of the work?

A एक काम को 15 दिनों में और B 30 दिनों में कर सकता है। यदि वे इसे एक साथ मिलकर करते हैं, तो वे कितने दिनों में 50% काम करने में सक्षम होंगे?

**Options:**

- 1) 5
- 2) 6
- 3) 4
- 4) 3

**Correct Answer:** 5

**Candidate Answer:** 5

**QID : 53** - What is the area (in sq cm) of an equilateral triangle of side 10 cm?

10 सें.मी. भुजा वाले समबाहु त्रिकोण का क्षेत्रफल (वर्ग सें.मी. में) क्या है?

**Options:**

- 1)  $25\sqrt{3}$
- 2)  $50\sqrt{3}$
- 3)  $75\sqrt{3}$
- 4)  $10\sqrt{3}$

**Correct Answer:**  $25\sqrt{3}$

**Candidate Answer:**  $25\sqrt{3}$

**QID : 54** - What is the effective discount (in %) on two successive discounts of 15% and 50%?

15% और 50% की लगातार दो छूट देने पर प्रभावी छूट (%) में क्या होगी?

**Options:**

- 1) 65
- 2) 57.5
- 3) 35
- 4) 42.5

**Correct Answer:** 57.5

**Candidate Answer:** 57.5

**QID : 55** - Profit of Rs 42,500 has to be divided between three partners A, B and C in the ratio 3:5:9. How much (in Rs) does A get?

42,500 रु के लाभ को 3:5:9 के अनुपात में तीन भागीदारों A, B और C के बीच विभाजित किया जाना है। A को कितना (रु में) मिलता है?

**Options:**

- 1) 12500
- 2) 9500
- 3) 22500
- 4) 7500

**Correct Answer:** 7500

**Candidate Answer:** 7500

**QID : 56** - The average weight of A, B and C is 49 kg. If the average weight of A and B is 35 kg and that of B and C is 62 kg, then the weight of B (in kgs) is?

A, B और C का औसत वजन 49 कि.ग्रा. है। यदि A और B का औसत वजन 35 कि.ग्रा. है और B और C का 62 कि.ग्रा. है, तो B का वजन (कि.ग्रा में) कितना है?

**Options:**

- 1) 47
- 2) 45
- 3) 43
- 4) 49

**Correct Answer:** 47

**Candidate Answer:** 47

**QID : 57** - A shopkeeper by selling 6 items, earns a profit equal to the selling price of 1 item. What is his profit percentage?

एक दुकानदार 6 वस्तु बेचकर 1 वस्तु की बिक्री मूल्य के बराबर लाभ कमाता है। उसका लाभ प्रतिशत कितना है?

**Options:**

- 1) 20
- 2) 25
- 3) 30
- 4) 35

**Correct Answer:** 20

**Candidate Answer:** 20

**QID : 58** - What is the value of 125% of 25% of 80?

80 के 25% के 125% का मान क्या है?

**Options:**

- 1) 50
- 2) 25
- 3) 20
- 4) 40

**Correct Answer:** 25

**Candidate Answer:** 25

**QID : 59** - To cover a distance of 81 km in 1.5 hours what should be the average speed of the car in meters/second?

81 कि.मी. की दूरी को 1.5 घंटे में तय करने के लिए मीटर / सेकंड में कार की औसत गति क्या होनी चाहिए?

**Options:**

- 1) 10
- 2) 15
- 3) 12
- 4) 9

**Correct Answer:** 15

**Candidate Answer:** 15

**QID : 60** - In 4 years at simple interest the principal increases by 32%. What will be the compound interest earned (in Rs) on Rs. 24,000 in 3 years at the same rate?

यदि 4 सालों में साधारण ब्याज पर मूलधन 32% से बढ़ जाता है, तो उसी दर पर 3 साल में 24,000 रु पर अर्जित चक्रवृद्धि ब्याज (रु में) क्या होगा?

**Options:**

- 1) 5233
- 2) 6332
- 3) 5332
- 4) 6233

**Correct Answer:** 6233

**Candidate Answer:** 5332

**QID : 61** - If  $5/2(8x/3 - 1/2) + 13/2 = 2x/3$ , then what is the value of x?

यदि  $5/2(8x/3 - 1/2) + 13/2 = 2x/3$ , तो x का मान क्या है?

**Options:**

- 1)  $7/8$
- 2)  $8/7$
- 3)  $-8/7$
- 4)  $-7/8$

**Correct Answer:**  $-7/8$

**Candidate Answer:**  $-7/8$

**QID : 62** - If  $a^3 + b^3 = 72$  and  $ab = 8$ , then what is the value of  $a + b$ ?

यदि  $a^3 + b^3 = 72$  और  $ab = 8$  है, तो  $a + b$  का मान क्या है?

**Options:**

- 1) 2
- 2) 5
- 3) 6
- 4) 3

**Correct Answer:** 6

**Candidate Answer:** 6

**QID : 63** - Sum of four times a fraction and 7 times its reciprocal is 16. What is the fraction?

एक भिन्न का चार गुना और उसके व्युत्क्रम के 7 गुना का योग 16 है। वह भिन्न कौन सा है?

**Options:**

- 1)  $2/7$
- 2)  $7/2$
- 3)  $4/7$
- 4)  $7/4$

**Correct Answer:**  $7/2$

**Candidate Answer:**  $7/2$

**QID : 64** - What is the sum of the first 11 terms of an arithmetic progression if the 3rd term is -1 and the 8th term is 19?

एक समांतर श्रेणी के प्रथम 11 पदों का योग क्या है, यदि तीसरा पद -1 है और आठवां पद 19 है।

**Options:**

- 1) 204
- 2) 99
- 3) 225
- 4) 104

**Correct Answer:** 99

**Candidate Answer:** 99

**QID : 65** - What is the reflection of the point ( -3, 2) in the line  $x = -2$ ?

रेखा  $x = -2$  में बिंदु (-3, 2) का प्रतिबिंब क्या है?

**Options:**

1) ( -3 , -6)

2) (1 , 2)

3) ( -3 , 6)

4) (-1 , 2)

**Correct Answer:** (-1 , 2)

**Candidate Answer:** (-1 , 2)

**QID : 66** - Point P is the midpoint of segment AB. Co-ordinates of P are (1 , 3) and A are (-3 , 8). What are the co-ordinates of point B?

बिंदु P रेखाखंड AB का मध्य बिंदु है। P के निर्देशांक (1, 3) हैं और A के (-3, 8) हैं। बिंदु B के निर्देशांक क्या हैं?

**Options:**

1) (-5 , -2)

2) (-5 , 2)

3) (5 , 2)

4) (5 , -2)

**Correct Answer:** (5 , -2)

**Candidate Answer:** (5 , -2)

**QID : 67** - What is the slope of the line perpendicular to the line passing through the points (3 , -2) and (4 , 2)?

(3, -2) और (4, 2) बिंदुओं के माध्यम से गुजरने वाली रेखा के अभिलम्ब रेखा की ढलान क्या है?

**Options:**

1)  $1/4$

2) 4

3) -4

4)  $-1/4$

**Correct Answer:**  $-1/4$

**Candidate Answer:**  $-1/4$

**QID : 68** -  $\triangle ABC$  is similar to  $\triangle PQR$ . If ratio of perimeters of  $\triangle ABC$  and  $\triangle PQR$  is 3:7 and if  $PQ = 21$  cm, then the length of AB (in cm) is?

$\triangle ABC$   $\triangle PQR$  के समान है। यदि  $\triangle ABC$  और  $\triangle PQR$  की परिधियों का अनुपात 3:7 है और यदि  $PQ = 21$  सें.मी. है, तो AB की लंबाई (सें.मी. में) कितनी है?

**Options:**

1) 6

2) 14

3) 9

4) 18

**Correct Answer:** 9

**Candidate Answer:** 9

**QID : 69** - What is the value of  $2 \sec 45^\circ + \tan 30^\circ$  ?

$2 \sec 45^\circ + \tan 30^\circ$  का मान क्या है?

**Options:**

1)  $(2\sqrt{6} + 1)/\sqrt{3}$

2)  $\sqrt{3}$

3)  $(2\sqrt{2} + 3)/\sqrt{6}$

4)  $(9 + 2\sqrt{3})/9$

**Correct Answer:**  $(2\sqrt{6} + 1)/\sqrt{3}$

**Candidate Answer:**  $(2\sqrt{6} + 1)/\sqrt{3}$

**QID : 70** -  $\triangle ABC$  is right angled at B. If  $m\angle A = 60^\circ$ , then what is the value of  $\cot C$ ?

$\triangle ABC$ , B पर समकोण है। यदि  $m\angle A = 60^\circ$  है, तो  $\cot C$  का मान क्या होगा?

**Options:**

1)  $\sqrt{2}$

2)  $1/\sqrt{3}$

3)  $\sqrt{3}$

4)  $2/\sqrt{3}$

**Correct Answer:**  $\sqrt{3}$

**Candidate Answer:**  $\sqrt{3}$

**QID : 71** - If  $\operatorname{Cosec} \theta = 25/7$ , then what is the value of  $\cos \theta$ ?

यदि  $\operatorname{Cosec} \theta = 25/7$ , तो  $\cos \theta$  का मान क्या होगा?

**Options:**

- 1) 25/24
- 2) 7/24
- 3) 24/25
- 4) 7/25

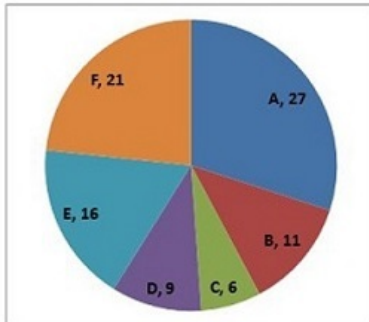
**Correct Answer:** 24/25

**Candidate Answer:** 24/25

**QID : 72 -**

The pie chart shows the votes in 1000s polled in favour of six candidates (A, B, C, D, E, F) contesting for a particular seat. Study the diagram and answer the following questions.

पाई चार्ट एक सीट के लिए चुनाव लड़ रहे छह उम्मीदवारों (A, B, C, D, E, F) के पक्ष में मिले वोट (हज़ारों में) दर्शाता है। इस आरेख का अध्ययन करें और निम्नलिखित प्रश्नों का उत्तर दें।



If Candidate A is disqualified then which candidate will be declared the winner?

यदि उम्मीदवार A को अयोग्य घोषित कर दिया जाता है तो किस उम्मीदवार को विजेता घोषित किया जाएगा?

**Options:**

- 1) E
- 2) B
- 3) F
- 4) D

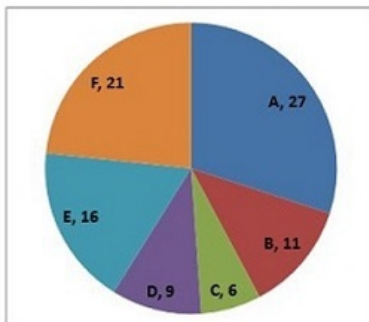
**Correct Answer:** F

**Candidate Answer:** F

**QID : 73 -**

The pie chart shows the votes in 1000s polled in favour of six candidates (A, B, C, D, E, F) contesting for a particular seat. Study the diagram and answer the following questions.

पाई चार्ट एक सीट के लिए चुनाव लड़ रहे छह उम्मीदवारों (A, B, C, D, E, F) के पक्ष में मिले वोट (हज़ारों में) दर्शाता है। इस आरेख का अध्ययन करें और निम्नलिखित प्रश्नों का उत्तर दें।



The winning candidate got how many more votes than the one who came second?

विजेता उम्मीदवार को दूसरे स्थान पर आने वाले उम्मीदवार की तुलना में कितने अधिक वोट मिले?

**Options:**

- 1) 6000
- 2) 5000
- 3) 11000
- 4) 7000

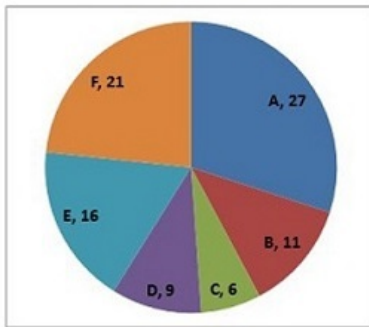
**Correct Answer:** 6000

**Candidate Answer:** 6000

**QID : 74 -**

The pie chart shows the votes in 1000s polled in favour of six candidates (A, B, C, D, E, F) contesting for a particular seat. Study the diagram and answer the following questions.

पाई चार्ट एक सीट के लिए चुनाव लड़ रहे छह उम्मीदवारों (A, B, C, D, E, F) के पक्ष में मिले वोट (हज़ारों में) दर्शाता है। इस आरेख का अध्ययन करें और निम्नलिखित प्रश्नों का उत्तर दें।



Analysts believe that if candidate E had not stood in the fray then votes that he got would have been equally divided between F and C, then what would have been the result?

विश्लेषकों का मानना है कि यदि उम्मीदवार E चुनाव में न खड़ा होता तो उसे मिले वोट F और C के मध्य बराबर विभाजित हो जाते, तो इसका परिणाम क्या होता?

**Options:**

- 1) A would have lost by 1000 votes  
A 1000 वोटों से हार जाता
- 2) F would have won by 2000 votes  
F 2000 वोटों से जीत जाता
- 3) F would have lost by 2000 votes  
F 2000 वोटों से हार जाता
- 4) A would have won by 1000 votes  
A 1000 वोटों से जीत जाता

**Correct Answer:** F would have won by 2000 votes

F 2000 वोटों से जीत जाता

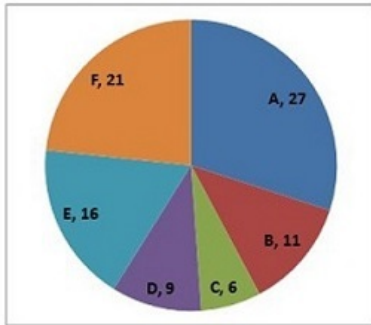
**Candidate Answer:** F would have won by 2000 votes

F 2000 वोटों से जीत जाता

**QID : 75 -**

The pie chart shows the votes in 1000s polled in favour of six candidates (A, B, C, D, E, F) contesting for a particular seat. Study the diagram and answer the following questions.

पाई चार्ट एक सीट के लिए चुनाव लड़ रहे छह उम्मीदवारों (A, B, C, D, E, F) के पक्ष में मिले वोट (हज़ारों में) दर्शाता है। इस आरेख का अध्ययन करें और निम्नलिखित प्रश्नों का उत्तर दें।



If voting attendance was 60% then how many names must be there in the voter list?

यदि मतदान 60% हुआ हो तो मतदाता सूची में कितने नाम होंगे?

**Options:**

1) 225000

2) 90000

3) 144000

4) 150000

**Correct Answer:** 150000

**Candidate Answer:** 225000

**QID : 76 -** In the following question, some part of the sentence may have errors. Find out which part of the sentence has an error and select the appropriate option. If a sentence is free from error, select 'No Error'.

A slow smile worked (1)/ its way cross his (2)/ face and into his eyes. (3)/No Error (4)

**Options:**

1) 1

2) 2

3) 3

4) 4

**Correct Answer:** 2

**Candidate Answer:** 1

**QID : 77 -** In the following question, some part of the sentence may have errors. Find out which part of the sentence has an error and select the appropriate option. If a sentence is free from error, select 'No Error'.

His expression gave no (1)/ clue of what was going (2)/ on among his head. (3)/ No Error (4)

**Options:**

1) 1

2) 2

3) 3

4) 4

**Correct Answer:** 3

**Candidate Answer:** 3

**QID : 78 -** In the following question, the sentence given with blank to be filled in with an appropriate word. Select the correct alternative out of the four and indicate it by selecting the appropriate option.

After being given \_\_\_\_\_ warnings for disrupting class, Thomas was finally sent to the principal's office.

**Options:**

1) singular

2) lone

3) numerous

4) unique

**Correct Answer:** numerous

**Candidate Answer:** numerous

**QID : 79 -** In the following question, the sentence given with blank to be filled in with an appropriate word. Select the correct alternative out of the four and indicate it by selecting the appropriate option.

The \_\_\_\_\_ "pretty ugly" implies that a person can be both attractive and unattractive at the same time.



**Options:**

- 1) simile
- 2) metaphor
- 3) alliteration
- 4) oxymoron

**Correct Answer:** oxymoron

**Candidate Answer:** metaphor

**QID : 80** - In the following question, out of the four alternatives, select the word similar in meaning to the word given.

**Cynicism**

**Options:**

- 1) Conviction
- 2) Bitterness
- 3) Credence
- 4) Intuition

**Correct Answer:** Bitterness

**Candidate Answer:** Bitterness

**QID : 81** - In the following question, out of the four alternatives, select the word similar in meaning to the word given.

**Pinnacle**

**Options:**

- 1) Culmination
- 2) Nadir
- 3) Nethermost
- 4) Basal

**Correct Answer:** Culmination

**Candidate Answer:** Nethermost

**QID : 82** - In the following question, out of the four alternatives, select the word opposite in meaning to the word given.

**Befuddle**

**Options:**

- 1) Baffle
- 2) Daze
- 3) Fluster
- 4) Explicate

**Correct Answer:** Explicate

**Candidate Answer:** Explicate

**QID : 83** - In the following question, out of the four alternatives, select the word opposite in meaning to the word given.

**Supplant**

**Options:**

- 1) Supersede
- 2) Surrender
- 3) Usurp
- 4) Oust

**Correct Answer:** Surrender

**Candidate Answer:** Surrender

**QID : 84** - In the following question, out of the four alternatives, select the alternative which best expresses the meaning of the idiom/phrase.

**Get the message**

**Options:**

- 1) Understand what is implied by a remark or action
- 2) Communicate using a secret language
- 3) Find it difficult to understand a different language
- 4) Fire someone from a job

**Correct Answer:** Understand what is implied by a remark or action

**Candidate Answer:** Understand what is implied by a remark or action

**QID : 85** - In the following question, out of the four alternatives, select the alternative which best expresses the meaning of the idiom/phrase.

**Keep at bay**

**Options:**

- 1) Keep your problems to yourselves
- 2) to control something and prevent it from causing you problems
- 3) Not share a secret
- 4) Maintain a long distance relationship

**Correct Answer:** to control something and prevent it from causing you problems

**Candidate Answer:** Maintain a long distance relationship

**QID : 86** - In the following question, out of the four alternatives, select the alternative which will improve the bracketed part of the sentence. In case no improvement is needed, select "no improvement".

Tom pretended to not **(heard)** a thing.

**Options:**

- 1) hear
- 2) hearing
- 3) be hearing
- 4) no improvement

**Correct Answer:** hear

**Candidate Answer:** hear

**QID : 87** - In the following question, out of the four alternatives, select the alternative which will improve the bracketed part of the sentence. In case no improvement is needed, select "no improvement".

He must (**has change**) clothes during the night.

**Options:**

- 1) have changed
- 2) has changed
- 3) have changes
- 4) no improvement

**Correct Answer:** have changed

**Candidate Answer:** have changed

**QID : 88** - In the following question, out of the four alternatives, select the alternative which is the best substitute of the words/sentence.

**Deriving pleasure from inflicting pain**

**Options:**

- 1) Sadistic
- 2) Genial
- 3) Tender
- 4) Placid

**Correct Answer:** Sadistic

**Candidate Answer:** Sadistic

**QID : 89** - In the following question, out of the four alternatives, select the alternative which is the best substitute of the words/sentence.

**A person highly skilled in music**

**Options:**

- 1) Virtuoso
- 2) Amateur
- 3) Novice
- 4) Dabbler

**Correct Answer:** Virtuoso

**Candidate Answer:** Virtuoso

**QID : 90** - In the following question, four words are given out of which one word is correctly spelt. Select the correctly spelt word.

**Options:**

- 1) palatable
- 2) palateble
- 3) pallateble
- 4) pallatable

**Correct Answer:** palatable

**Candidate Answer:** palatable

**QID : 91** - In the following question, four words are given out of which one word is correctly spelt. Select the correctly spelt word.

**Options:**

- 1) unnerving
- 2) unnerveing
- 3) unerving
- 4) unerveing

**Correct Answer:** unnerving

**Candidate Answer:** unnerving

**QID : 92** - The question below consists of a set of labelled sentences. Out of the four options given, select the most logical order of the sentences to form a coherent paragraph.

At length, about an hour later, we  
**X**-spied a little pile of boulders rising  
**Y**-this we dragged ourselves  
**Z**-out of the plain, and to

**Options:**

- 1) XYZ
- 2) ZYX
- 3) XZY
- 4) ZXY

**Correct Answer:** XZY

**Candidate Answer:** XZY

**QID : 93** - The question below consists of a set of labelled sentences. Out of the four options given, select the most logical order of the sentences to form a coherent paragraph.

Secondly, it is consistent  
**X**-with human experience that  
**Y**-places and be depressed in others  
**Z**-land should rise gradually in some

**Options:**

- 1) XYZ
- 2) ZYX
- 3) ZXY
- 4) XZY

**Correct Answer:** XZY

**Candidate Answer:** XZY

**QID : 94** - In the following question, a sentence has been given in Active/Passive voice. Out of the four alternatives suggested, select the one which best expresses the same sentence in Passive/Active voice.

**The labourers paved the entire stretch of the road.**

**Options:**

- 1) The entire stretch of the road is paved by the labourers.
- 2) Paving of the entire stretch of the road was done by the labourers.
- 3) The entire stretch of the road was paved by the labourers.
- 4) Paving of the entire stretch of the road is done by the labourers.

**Correct Answer:** The entire stretch of the road was paved by the labourers.

**Candidate Answer:** The entire stretch of the road was paved by the labourers.

**QID : 95** - In the following question, a sentence has been given in Direct/Indirect speech. Out of the four alternatives suggested, select the one which best expresses the same sentence in Indirect/Direct speech.

**The visitor said, "Is your mother at home?"**

**Options:**

- 1) The visitor asked me is my mother at home.
- 2) The visitor asked to me whether my mother was at home.
- 3) The visitor asked to me is my mother at home.
- 4) The visitor asked me whether my mother was at home.

**Correct Answer:** The visitor asked me whether my mother was at home.

**Candidate Answer:** The visitor asked me whether my mother was at home.

**QID : 96** - A passage is given with 5 questions following it. Read the passage carefully and choose the best answer to each question out of the four alternatives.

**But before I could be inspired by these amazing people, I had to cleanse my feed. I know my weaknesses: just last week, Facebook memories reminded me of a pizza party I'd had two years ago and I ended up ordering a chicken dominator, with garlic breadsticks and an jalapeno cheese dip. So much for Day One of Couch to 5K training. I stayed right on that couch. So far I've unfollowed Buzzfeed Tasty, TasteMade (even their adorable Tiny Kitchen) and several people who have the enviable advantage of being able to eat as much as they want and not put on weight. By my calculations, dark chocolate is healthy, so I'm still following Earth Loaf, Pascati and Mason & Co.**

**When I finally found a gym I liked, with the best trainers I have had, I unabashedly shared my workouts every day. From shying away from full-length pictures, I reached a point where I could share videos of myself deadlifting and doing back squats with a barbell across my shoulders. It gave me accountability: I challenged myself to go to the gym for 30 classes straight, and I did it. Which reminds me, it's time to start a new challenge.**

Posts related to which topic does the writer want to remove from her feed?

**Options:**

- 1) Dark Chocolate
- 2) Make-up
- 3) Sari
- 4) Food

**Correct Answer:** Food

**Candidate Answer:** Food

**QID : 97** - A passage is given with 5 questions following it. Read the passage carefully and choose the best answer to each question out of the four alternatives.

**But before I could be inspired by these amazing people, I had to cleanse my feed. I know my weaknesses: just last week, Facebook memories reminded me of a pizza party I'd had two years ago and I ended up ordering a chicken dominator, with garlic breadsticks and an jalapeno cheese dip. So much for Day One of Couch to 5K training. I stayed right on that couch. So far I've unfollowed Buzzfeed Tasty, TasteMade (even their adorable Tiny Kitchen) and several people who have the enviable advantage of being able to eat as much as they want and not put on weight. By my calculations, dark chocolate is healthy, so I'm still following Earth Loaf, Pascati and Mason & Co.**

**When I finally found a gym I liked, with the best trainers I have had, I unabashedly shared my workouts every day. From shying away from full-length pictures, I reached a point where I could share videos of myself deadlifting and doing back squats with a barbell across my shoulders. It gave me accountability: I challenged myself to go to the gym for 30 classes straight, and I did it. Which reminds me, it's time to start a new challenge.**

What has the writer succeeded in doing?

**Options:**

- 1) Lost the desired weight
- 2) Succeeded in overcoming temptations to order pizzas
- 3) Attended 30 gym classes without a break
- 4) Removed unhealthy posts including about chocolates

**Correct Answer:** Attended 30 gym classes without a break

**Candidate Answer:** Attended 30 gym classes without a break

**QID : 98** - A passage is given with 5 questions following it. Read the passage carefully and choose the best answer to each question out of the four alternatives.

**But before I could be inspired by these amazing people, I had to cleanse my feed. I know my weaknesses: just last week, Facebook memories reminded me of a pizza party I'd had two years ago and I ended up ordering a chicken dominator, with garlic breadsticks and an jalapeno cheese dip. So much for Day One of Couch to 5K training. I stayed right on that couch. So far I've unfollowed Buzzfeed Tasty, TasteMade (even their adorable Tiny Kitchen) and several people who have the enviable advantage of being able to eat as much as they want and not put on weight. By my calculations, dark chocolate is healthy, so I'm still following Earth Loaf, Pascati and Mason & Co.**

**When I finally found a gym I liked, with the best trainers I have had, I unabashedly shared my workouts every day. From shying away from full-length pictures, I reached a point where I could share videos of myself deadlifting and doing back squats with a barbell across my shoulders. It gave me accountability: I challenged myself to go to the gym for 30 classes straight, and I did it. Which reminds me, it's time to start a new challenge.**

Which of the following is a page related to chocolate?

**Options:**

- 1) Earth Loaf
- 2) Buzzfeed Tasty
- 3) TasteMade
- 4) Tiny Kitchen

**Correct Answer:** Earth Loaf

**Candidate Answer:** Buzzfeed Tasty

**QID : 99** - A passage is given with 5 questions following it. Read the passage carefully and choose the best answer to each question out of the four alternatives.

**But before I could be inspired by these amazing people, I had to cleanse my feed. I know my weaknesses: just last week, Facebook memories reminded me of a pizza party I'd had two years ago and I ended up ordering a chicken dominator, with garlic breadsticks and an jalapeno cheese dip. So much for Day One of Couch to 5K training. I stayed right on that couch. So far I've unfollowed Buzzfeed Tasty, TasteMade (even their adorable Tiny Kitchen) and several people who have the enviable advantage of being able to eat as much as they want and not put on weight. By my calculations, dark chocolate is healthy, so I'm still following Earth Loaf, Pascati and Mason & Co.**

**When I finally found a gym I liked, with the best trainers I have had, I unabashedly shared my workouts every day. From shying away from full-length pictures, I reached a point where I could share videos of myself deadlifting and doing back squats with a barbell across my shoulders. It gave me accountability: I challenged myself to go to the gym for 30 classes straight, and I did it. Which reminds me, it's time to start a new challenge.**

What weight loss program has the writer enrolled in?

**Options:**

- 1) 30 Straight gym classes
- 2) Couch to 5K
- 3) Mason & Co
- 4) Eat chocolate to lose weight

**Correct Answer:** Couch to 5K

**Candidate Answer:** Couch to 5K

**QID : 100** - A passage is given with 5 questions following it. Read the passage carefully and choose the best answer to each question out of the four alternatives.

**But before I could be inspired by these amazing people, I had to cleanse my feed. I know my weaknesses: just last week, Facebook memories reminded me of a pizza party I'd had two years ago and I ended up ordering a chicken dominator, with garlic breadsticks and an jalapeno cheese dip. So much for Day One of Couch to 5K training. I stayed right on that couch. So far I've unfollowed Buzzfeed Tasty, TasteMade (even their adorable Tiny Kitchen) and several people who have the enviable advantage of being able to eat as much as they want and not put on weight. By my calculations, dark chocolate is healthy, so I'm still following Earth Loaf, Pascati and Mason & Co.**

**When I finally found a gym I liked, with the best trainers I have had, I unabashedly shared my workouts every day. From shying away from full-length pictures, I reached a point where I could share videos of myself deadlifting and doing back squats with a barbell across my shoulders. It gave me accountability: I challenged myself to go to the gym for 30 classes straight, and I did it. Which reminds me, it's time to start a new challenge.**

What gave the writer accountability?

**Options:**

- 1) Sharing her workout videos on social media
- 2) Unfollowing people and pages not related to health
- 3) Going to the gym daily
- 4) Doing challenging exercises like deadlifting

**Correct Answer:** Sharing her workout videos on social media

**Candidate Answer:** Sharing her workout videos on social media