



Staff Selection Commission
(Government Of India)

REGISTRATION NUMBER :
EXAM DATE : 20-August-2017
EXAM NAME : SSC Examination TOTAL
MARKS : 200

CANDIDATE NAME :
START TIME : 10:00:00
EXAM DURATION : 01:00 Hrs
TOTAL NO OF QUESTIONS : 100

QID : 1 - Select the related word from the given alternatives.

Spring : Spiral :: Bangle : ?

दिए गए विकल्पों में से संबंधित शब्द को चुनिए।

स्प्रिंग : स्पाइरल :: बूड़ी : ?

Options:

- 1) Glass
काँच
- 2) Circle
चक्र
- 3) Ornament
आभूषण
- 4) Gold
सोना

Correct Answer: Circle
चक्र

Candidate Answer: Circle
चक्र

QID : 2 - Select the related letters from the given alternatives.

WUV : TRS :: QOP : ?

दिए गए विकल्पों में से संबंधित अक्षरों को चुनिए।

WUV : TRS :: QOP : ?

Options:

- 1) XYZ
- 2) CBA
- 3) ABZ
- 4) NLM

Correct Answer: NLM

Candidate Answer: NLM

QID : 3 - Select the related number from the given alternatives.

7.25 : 7.75 :: 9 : ?

दिए गए विकल्पों में से संबंधित संख्या को चुनिए।

7.25 : 7.75 :: 9 : ?

Options:

- 1) 9.5
- 2) 7
- 3) 10
- 4) 8.5

Correct Answer: 9.5

Candidate Answer: 9.5

QID : 4 - Select the odd word from the given alternatives.

दिए गए विकल्पों में से विषम शब्द को चुनिए।

Options:

- 1) Sparrow
गौरैया
- 2) Pigeon
कबूतर
- 3) Crow
कौआ
- 4) Housefly
मक्खी

Correct Answer: Housefly
मक्खी

Candidate Answer: Housefly
मक्खी

QID : 5 - Select the odd letters from the given alternatives.

दिए गए विकल्पों में से विषम अक्षरों को चुनिए।

Options:

- 1) RQS
- 2) XWV
- 3) MLN
- 4) FEG

Correct Answer: XWV

Candidate Answer: XWV

QID : 6 - Select the odd number from the given alternatives.

दिए गए विकल्पों में से विषम संख्या को चुनिए।

Options:

- 1) 700
- 2) 250
- 3) 350
- 4) 640

Correct Answer: 640

Candidate Answer: 700

QID : 7 - A series is given, with one word missing. Choose the correct alternative from the given ones that will complete the series.

Oxygen, Toil, Arouse, Arson, Tenuous, ?

एक अनुक्रम दिया गया है, जिसमें एक शब्द लुप्त है। दिए गए विकल्पों में से वह सही विकल्प चुनिए जो अनुक्रम को पूरा करे।

Oxygen, Toil, Arouse, Arson, Tenuous, ?

Options:

- 1) Onion
- 2) Lustrous
- 3) Lion
- 4) Onto

Correct Answer: Lustrous

Candidate Answer: [NOT ANSWERED]

QID : 8 - A series is given, with one term missing. Choose the correct alternative from the given ones that will complete the series.

ZYX, VUT, QPO, MLK, HGF, ?

एक अनुक्रम दिया गया है, जिसमें एक पद लुप्त है। दिए गए विकल्पों में से वह सही विकल्प चुनिए जो अनुक्रम को पूरा करे।

ZYX, VUT, QPO, MLK, HGF, ?

Options:

- 1) DCB
- 2) CBA
- 3) BCD
- 4) EDC

Correct Answer: DCB

Candidate Answer: DCB

QID : 9 - A series is given, with one number missing. Choose the correct alternative from the given ones that will complete the series.

400, -200, 100, ?, 25, -12.5

एक अनुक्रम दिया गया है, जिसमें एक संख्या लुप्त है। दिए गए विकल्पों में से वह सही विकल्प चुनिए जो अनुक्रम को पूरा करे।

400, -200, 100, ?, 25, -12.5

Options:

1) -50

2) 50

3) 75

4) -75

Correct Answer: -50

Candidate Answer: -50

QID : 10 - Bhavin's birthday is on Monday 29th May. On what day of the week will be Rachit's Birthday in the same year if Rachit was born on 17th November?

भाविन का जन्मदिन सोमवार 29 मई को है। यदि रचित का जन्म 17 नवंबर को हुआ था तो उसी वर्ष रचित का जन्मदिन सप्ताह में किस दिन होगा?

Options:

1) Saturday

शनिवार

2) Wednesday

बुधवार

3) Sunday

रविवार

4) Friday

शुक्रवार

Correct Answer: Friday

शुक्रवार

Candidate Answer: Friday

शुक्रवार

QID : 11 - The weights of 4 boxes are 30, 70, 60 and 90 kilograms. Which of the following cannot be the total weight, in kilograms, of any combination of these boxes and in a combination a box can be used only once?

चार बक्सों का वजन 30, 70, 60 और 90 किलोग्राम है। निम्नलिखित में से बक्सों के किसी भी संयोजन से कुल वजन, किलोग्राम में कौन सा नहीं हो सकता है और एक संयोजन में एक बक्सा एक ही बार प्रयोग में लाया जा सकता है?

Options:

1) 250

2) 200

3) 190

4) 220

Correct Answer: 200

Candidate Answer: 200

QID : 12 - From the given words, select the word which cannot be formed using the letters of the given word.

MYSTIQUE

निम्नलिखित विकल्पों में से वह शब्द चुनिए जो दिए गए शब्द के अक्षरों का प्रयोग करके नहीं बनाया जा सकता:

MYSTIQUE

Options:

1) EMITS

2) TEAMS

3) SUITE

4) QUIET

Correct Answer: TEAMS

Candidate Answer: TEAMS

QID : 13 - If **IMPLORE** is coded as **GKNJMPC**, then how will **HUB** be coded as?

यदि **IMPLORE** को किसी कोड में **GKNJMPC** लिखा जाता है, तो **HUB** को उसी कोड में क्या लिखा जाएगा?

Options:

1) AWN

2) WAO

3) FSZ

4) TEY

Correct Answer: FSZ

Candidate Answer: FSZ

QID : 14 - In a certain code language, '+' represents 'x', '-' represents '+', 'x' represents '÷' and '÷' represents '-'. What is the answer to the following question?

$72 \times 9 - 14 + 2 = ?$

किसी कोड भाषा में, '+' का मतलब 'x' है, '-' का मतलब '+' है, 'x' का मतलब '÷' है और '÷' का मतलब '-' है। निम्नलिखित प्रश्न का उत्तर क्या है?

$72 \times 9 - 14 + 2 = ?$

Options:

1) 20

2) 86

3) 30

4) 36

Correct Answer: 36

Candidate Answer: 36

QID : 15 - If $52 \% 32 = 40$, $22 \% 20 = 4$ then what is the value of $15 \% 11 = ?$

यदि $52 \% 32 = 40$, $22 \% 20 = 4$ तो $15 \% 11 = ?$ का मान ज्ञात कीजिये।

Options:

1) 39

2) 11

3) 39

4) 8

Correct Answer: 8

Candidate Answer: [NOT ANSWERED]

QID : 16 -

Select the missing number from the given responses

दिए गए विकल्पों में से लुप्त संख्या चुनिए।

216	16	49
3	4	?
6	2	7

Options:

1) 42

2) 56

3) 2

4) 5

Correct Answer: 2

Candidate Answer: 2

QID : 17 - A woman in a shopping complex walks 250 m East, then she turns North and walks 100 m, then she turns West and walks 120 m, then she turns to her left and walks 100 m. Where is she now with reference to her starting position?

शॉपिंग कॉम्प्लेक्स में एक महिला 250 मीटर पूर्व की ओर चलती है, फिर वह उत्तर की ओर मुड़ जाती है और 100 मीटर तक चलती है, फिर वह पश्चिम की ओर मुड़ जाती है और 120 मीटर तक चलती है, फिर वह अपनी बाईं ओर मुड़ जाती है और 100 मीटर तक चलती है। वह अपनी प्रारंभिक स्थिति से अब कहाँ है?

Options:

- 1) 130 m East
130 मीटर पूर्व
- 2) 130 m West
130 मीटर पश्चिम
- 3) 370 m East
370 मीटर पूर्व
- 4) 370 m West
370 मीटर पश्चिम

Correct Answer: 130 m East

130 मीटर पूर्व

Candidate Answer: 130 m East

130 मीटर पूर्व

QID : 18 - In the question two statements are given, followed by two conclusions, I and II. You have to consider the statements to be true even if it seems to be at variance from commonly known facts. You have to decide which of the given conclusions, if any, follows from the given statements.

Statement 1 : All drinks are food.**Statement 2 :** No eatables are drinks.**Conclusion I :** Some food are eatables.**Conclusion II :** Some eatables are food.

प्रश्न में दो कथन दिये गये हैं जिसके आगे दो निष्कर्ष I और II निकाले गये हैं। आपको मानना है कि दोनों कथन सत्य है चाहे वह सामान्यतः ज्ञात तथ्यों से भिन्न प्रतीत होते हों। आपको निर्णय करना है की दिए गए निष्कर्षों में से कौन-सा/कौन-से निश्चित रूप से कथन द्वारा सही निकाला जा सकता है/सकते हैं, यदि कोई हो।

कथन 1 : सभी पेय भोजन हैं।**कथन 2 :** कोई भी खाद्य-पदार्थ पेय नहीं है।**निष्कर्ष I :** कुछ भोजन खाद्य-पदार्थ हैं।**निष्कर्ष II :** कुछ खाद्य-पदार्थ भोजन हैं।**Options:**

- 1) Only conclusion I follows
केवल निष्कर्ष I सही है
- 2) Only conclusion II follows
केवल निष्कर्ष II सही है
- 3) Both I and II follow
दोनों निष्कर्ष I और II सही है
- 4) Neither I nor II follows
ना तो निष्कर्ष I सही है ना ही निष्कर्ष II

Correct Answer: Neither I nor II follows

ना तो निष्कर्ष I सही है ना ही निष्कर्ष II

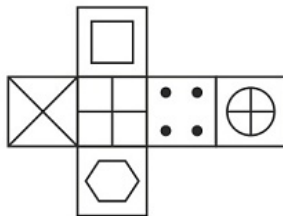
Candidate Answer: Neither I nor II follows

ना तो निष्कर्ष I सही है ना ही निष्कर्ष II

QID : 19 -

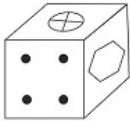
Which of the following cube in the answer figure cannot be made based on the unfolded cube in the question figure?

निम्नलिखित उत्तर आकृति में से कौन सा घन दिए गए प्रश्न आकृति में से खुले घन से बनाया नहीं जा सकता?

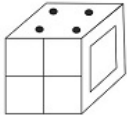


Options:

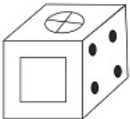
1)



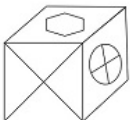
2)



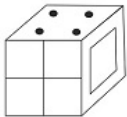
3)



4)



Correct Answer:

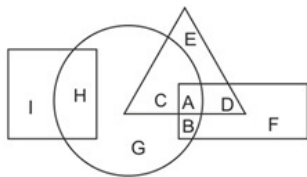


Candidate Answer: [NOT ANSWERED]

QID : 20 -

In the following figure, square represents Dentists, triangle represents Collectors, circle represents Indians and rectangle represents Women. Which set of letters represents Indians who are either collectors or women?

निम्नलिखित आकृति में, वर्ग दंत चिकित्सकों को दर्शाता है, त्रिभुज कलेक्टरों को दर्शाता है, वृत्त भारतीयों को दर्शाता है और आयत महिलाओं को दर्शाता है। अक्षरों का कौन सा समूह भारतीयों को दर्शाता है जो या तो कलेक्टर हैं या महिला हैं?



Options:

1) A,B,C

2) D,B,E

3) C,G,H

4) E,F,I

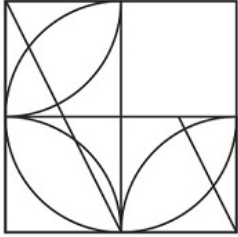
Correct Answer: A,B,C

Candidate Answer: A,B,C

QID : 21 -

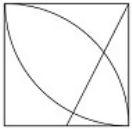
Which answer figure will complete the pattern in the question figure?

निम्नलिखित में से कौन-सी उत्तर आकृति प्रश्न आकृति के प्रतिरूप को पूरा करेगी?



Options:

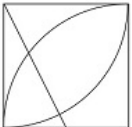
1)



2)



3)



4)



Correct Answer:



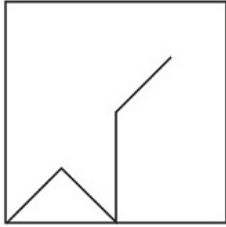
Candidate Answer:



QID : 22 -

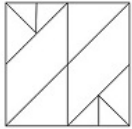
From the given answer figures, select the one in which the question figure is hidden/embedded.

दी गई उत्तर आकृतियों में से उस आकृति को चुनिए जिसमें प्रश्न आकृति निहित है।

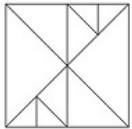


Options:

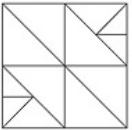
1)



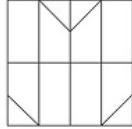
2)



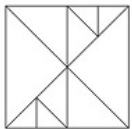
3)



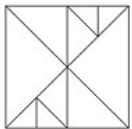
4)



Correct Answer:



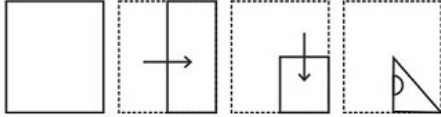
Candidate Answer:



QID : 23 -

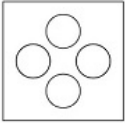
A piece of paper is folded and punched as shown below in the question figures. From the given answer figures, indicate how it will appear when opened.

प्रश्न आकृतियों में दिखाए अनुसार कागज को मोड़कर उसमें छेद करने तथा खोलने के बाद वह किस उत्तर आकृति जैसा दिखाई देगा?

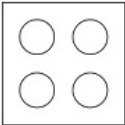


Options:

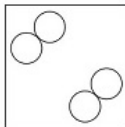
1)



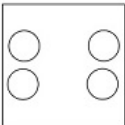
2)



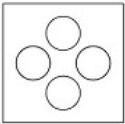
3)



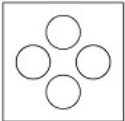
4)



Correct Answer:



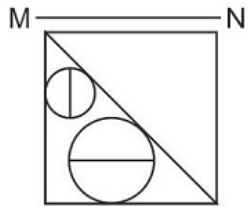
Candidate Answer:



QID : 24 -

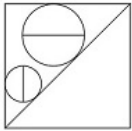
If a mirror is placed on the line MN, then which of the answer figures is the right image of the given figure?

यदि एक दर्पण को MN रेखा पर रखा जाए तो दी गई उत्तर आकृतियों में से कौन-सी आकृति प्रश्न आकृति का सही प्रतिबिम्ब होगी?

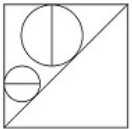


Options:

1)



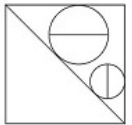
2)



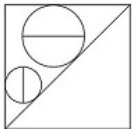
3)



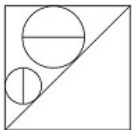
4)



Correct Answer:



Candidate Answer:



QID : 25 -

A word is represented by only one set of numbers as given in any one of the alternatives. The sets of numbers given in the alternatives are represented by two classes of alphabets as shown in the given two matrices. The columns and rows of Matrix-I are numbered from 0 to 4 and that of Matrix-II are numbered from 5 to 9. A letter from these matrices can be represented first by its row and next by its column, for example 'K' can be represented by 13, 34 etc and 'Z' can be represented by 85, 79 etc. Similarly, you have to identify the set for the word 'PLOT'.

एक शब्द केवल एक संख्या-समूह द्वारा दर्शाया गया है, जैसा कि विकल्पों में से किसी एक में दिया गया है। विकल्पों में दिए गए संख्या-समूह अक्षरों के दो वर्गों द्वारा दर्शाए गए हैं, जैसा कि दिए गए दो आव्यूहों में है। आव्यूह-I के स्तम्भ और पंक्ति की संख्या 0 से 4 और आव्यूह-II की 5 से 9 हैं। इन आव्यूहों से एक अक्षर को पहले उसकी पंक्ति और बाद में स्तम्भ संख्या द्वारा दर्शाया जा सकता है। उदाहरण के लिए 'K' को 13, 34 आदि द्वारा दर्शाया जा सकता है तथा 'Z' को 85, 79 आदि द्वारा दर्शाया जा सकता है। इसी तरह से आपको प्रश्न में दिए शब्द 'PLOT' के लिए समूह को पहचानना है।

Matrix I आव्यूह - I					
	0	1	2	3	4
0	J	B	B	I	A
1	A	G	F	K	L
2	H	E	F	G	C
3	I	A	M	A	K
4	J	F	C	B	M

Matrix II आव्यूह - II					
	5	6	7	8	9
5	O	U	O	P	U
6	P	X	U	N	Y
7	W	W	N	R	Z
8	Z	N	T	S	Y
9	U	W	U	U	X

Options:

1) 58,14,57,87

2) 44,04,76,86

3) 03,23,86,69

4) 23,04,99,99

Correct Answer: 58,14,57,87

Candidate Answer: 58,14,57,87

QID : 26 - The demand for a normal good increases with _____ in the consumer's income.

किसी सामान्य वस्तु की मांग में वृद्धि, उपभोक्ता की आय में _____ के साथ होती है।

Options:

1) increase

वृद्धि

2) decrease

गिरावट

3) constant

स्थिर

4) double

दुगना

Correct Answer: increase

वृद्धि

Candidate Answer: decrease

गिरावट

QID : 27 - Short run marginal cost curve cuts the average variable cost curve from _____ at the minimum point of average variable cost.

अल्पकालीन सीमांत लागत वक्र, औसत परिवर्ती लागत वक्र को _____ से औसत परिवर्ती लागत के न्यूनतम बिंदु पर काटता है।

Options:

1) top

ऊपर

2) below

निचे

3) right

दाएं

4) left

बाएं

Correct Answer: below

निचे

Candidate Answer: [NOT ANSWERED]

QID : 28 - "Forests" is listed in the _____ list given in the Seventh Schedule in the Constitution of India.

"जंगल" भारत के संविधान की सातवीं अनुसूची में दी गयी _____ सूची में सूचीबद्ध है।

Options:

1) Union

केंद्रीय

2) State

राज्य

3) Global

विश्व

4) Concurrent

समवर्ती

Correct Answer: Concurrent

समवर्ती

Candidate Answer: [NOT ANSWERED]

QID : 29 - Which Fundamental Right in the Indian Constitution states that all persons shall be equally protected by the laws of the country?

भारतीय संविधान के किस मौलिक अधिकार में कहा गया है की सभी लोगों को देश का क़ानून बराबर सुरक्षा प्रदान करेगा?

Options:

1) Right to Equality

समानता का अधिकार

2) Right to Freedom

स्वतंत्रता का अधिकार

3) Right against Exploitation

शोषण के विरुद्ध अधिकार

4) Right to Freedom of Religion

धार्मिक स्वतंत्रता का अधिकार

Correct Answer: Right to Equality

समानता का अधिकार

Candidate Answer: [NOT ANSWERED]

QID : 30 - _____ was imprisoned for the rest of his life by Aurangzeb.

_____ को उसकी शेष जिंदगी के लिए औरंगजेब ने कैद कर दिया।

Options:

1) Akbar

अकबर

2) Shah Jahan

शाह जहाँ

3) Jahangir

जहाँगीर

4) Babur

बाबर

Correct Answer: Shah Jahan

शाह जहाँ

Candidate Answer: Shah Jahan

शाह जहाँ

QID : 31 - Name the Commission that came to India in 1928 to reform India's constitutional system.

1928 में भारत में आये उस कमीशन का नाम बताएं जिसका उद्देश्य भारत की संवैधानिक व्यवस्था में सुधार करना था।

Options:

1) Rowlatt Act

रोलट एक्ट

2) Pitt's India Act

पिट्ट इंडिया एक्ट

3) Partition of Bengal

बंगाल विभाजन

4) Simon Commission

साइमन कमीशन

Correct Answer: Simon Commission

साइमन कमीशन

Candidate Answer: [NOT ANSWERED]

QID : 32 - _____ is an example of intrusive igneous rock.

_____ अंतर्भेदी आग्नेय शैल का उदाहरण है।

Options:

- 1) Conglomerate
संगुटिका
- 2) Shale
शेल
- 3) Sandstone
बलुआ पत्थर
- 4) Granite
ग्रेनाइट

Correct Answer: Granite
ग्रेनाइट

Candidate Answer: Granite
ग्रेनाइट

QID : 33 - The longitudinal valley lying between lesser Himalaya and the _____ are known as Duns.

निम्न हिमाचल और _____ के बीच में स्थित लम्बवत घाटी को दून के नाम से जाना जाता है।

Options:

- 1) Himadri
हिमाद्री
- 2) Himachal
हिमाचल
- 3) Shiwaliks
शिवालिक
- 4) Tibet
तिब्बत

Correct Answer: Shiwaliks
शिवालिक

Candidate Answer: [NOT ANSWERED]

QID : 34 - A multicellular organism grows by _____.

बहुकोशिक जीव _____ द्वारा वृद्धि करते हैं।

Options:

- 1) Cell addition
कोशिका अधिकता
- 2) Cell explosion
कोशिका विस्फोट
- 3) Cell implosion
कोशिका अन्तःस्फोट
- 4) Cell division
कोशिका विभाजन

Correct Answer: Cell division
कोशिका विभाजन

Candidate Answer: [NOT ANSWERED]

QID : 35 - The male sex organs in a flower is the _____.

पुष्प में नर लैंगिक अंग _____ है।

Options:

- 1) Zoospores
जूसपोर
- 2) stamen
पुंकेसर
- 3) pistil
स्त्रीकेसर
- 4) Chlorophyceae
क्लोरोफाइसी

Correct Answer: stamen
पुंकेसर

Candidate Answer: stamen
पुंकेसर

QID : 36 - In animals like Annelids, Molluscs, organs have associated to form functional systems, each system concerned with a specific physiological function. This pattern is called _____ system level of organization.

प्राणी में जैसे ऐनेलिड, मोलस्क, के अंग मिलकर तंत्र के रूप में शारीरिक कार्य करते हैं। प्रत्येक तंत्र एक विशिष्ट कार्य करता है। इस तरह की संरचना _____ के स्तर का संगठन कहा जाता है।

Options:

- 1) organ
अंगतंत्र
- 2) open
खुले
- 3) closed
बंद
- 4) coelom
प्रगुहा

Correct Answer: organ
अंगतंत्र

Candidate Answer: [NOT ANSWERED]

QID : 37 - Contact force is another name for _____.

संपर्क बल को _____ बल भी कहा जाता है।

Options:

- 1) Friction
घर्षण
- 2) Magnetic force
चुम्बकीय बल
- 3) Electrostatic force
स्थिर वैद्युत बल
- 4) Muscular force
पेशीय बल

Correct Answer: Muscular force
पेशीय बल

Candidate Answer: [NOT ANSWERED]

QID : 38 - The force of friction between two surfaces will increase if:

दो सतहों के बीच लगने वाला घर्षण बल बढ़ता है यदि:

Options:

- 1) a layer of lubricant is kept between the two surfaces
दो पृष्ठों के बीच स्नेहक की परत लगाई जाए
- 2) the two surfaces are pressed harder
दोनों पृष्ठों को बलपूर्वक दबाया जाए
- 3) air gap is created between the two surfaces
दो पृष्ठों के बीच हवा का अंतराल रखा जाए
- 4) irregularities on both the surfaces are removed
दोनों सतहों की अनियमितता को हटा दिया जाए

Correct Answer: the two surfaces are pressed harder
दोनों पृष्ठों को बलपूर्वक दबाया जाए

Candidate Answer: the two surfaces are pressed harder
दोनों पृष्ठों को बलपूर्वक दबाया जाए

QID : 39 - An absolute _____ contains the complete address of a file on the Internet.

ऐब्सोल्यूट _____ में इंटरनेट पर फाइल का सम्पूर्ण पता होता है।

Options:

- 1) JavaScript
जावास्क्रिप्ट
- 2) URL
यूआरएल
- 3) SQL
एसक्यूएल
- 4) String
स्ट्रिंग

Correct Answer: URL
यूआरएल

Candidate Answer: String
स्ट्रिंग

QID : 40 - A change in which no new substances are formed is called _____.

वह परिवर्तन जिसमें कोई नया पदार्थ नहीं बनता _____ कहलाता है।

Options:

- 1) Physical Change
भौतिक परिवर्तन
- 2) Chemical Change
रासायनिक परिवर्तन
- 3) Rusting
जंग लगना
- 4) Galvanisation
यशद लेपन (गैल्वेनाइजेशन)

Correct Answer: Physical Change

भौतिक परिवर्तन

Candidate Answer: Galvanisation

यशद लेपन (गैल्वनाइजेशन)

QID : 41 - The property of metal by which it can be drawn into wires is called _____.

धातुओं का वह गुण जिससे उन्हें खींचकर तारों में परिवर्तित किया जा सकता है, _____ कहलाता है।

Options:

1) malleability

आघातवर्धनीयता

2) viscosity

श्यानता

3) ductility

तन्यता

4) tensile strength

तनन-सामर्थ्य

Correct Answer: ductility

तन्यता

Candidate Answer: ductility

तन्यता

QID : 42 - _____ is the number of deaths in the population during a given period.

_____ यह दी गयी अवधि समष्टि में होने वाली मौतों की संख्या है।

Options:

1) Natality

जन्मदर

2) Mortality

मृत्युदर

3) Immigration

आप्रवासन

4) Emigration

उत्प्रवासन

Correct Answer: Mortality

मृत्युदर

Candidate Answer: Mortality

मृत्युदर

QID : 43 - _____ scheme by the Central Government aims at setting up an organized rural Panchayat in order to make the villages more self-sustained.

केंद्र सरकार द्वारा शुरू की गयी _____ योजना का उद्देश्य गांवों को अधिक आत्मनिर्भर बनाने के लिए एक संगठित ग्रामीण पंचायत की स्थापना करना है।

Options:

1) Gram Uday Se Bharat Uday Abhiyan

ग्राम उदय से भारत उदय अभियान

2) Pradhan Mantri Ujjwala Yojana

प्रधानमंत्री उज्ज्वला योजना

3) Pradhan Mantri Surakshit Matritva Yojana

प्रधानमंत्री सुरक्षित मातृत्व योजना

4) Vidyanjali Yojana

विद्याजलि योजना

Correct Answer: Gram Uday Se Bharat Uday Abhiyan

ग्राम उदय से भारत उदय अभियान

Candidate Answer: [NOT ANSWERED]

QID : 44 - Who discovered Circulatory System?

संचारित प्रणाली की खोज किसने की थी?

Options:

1) Thomas Edison

थॉमस एडिसन

2) William Harvey

विलियम हार्वे

3) Robert Hooke

रॉबर्ट हुक

4) Robert Boyle

रॉबर्ट बॉयल

Correct Answer: William Harvey

विलियम हार्वे

Candidate Answer: William Harvey

विलियम हार्वे

QID : 45 - Which country did India lose to in the semi finals of the Men's Cricket World Cup 2015?

वर्ष 2015 में क्रिकेट विश्व कप (पुरुष) में भारत किस देश से सेमीफाइनल में हारा था?

Options:

- 1) Sri Lanka
श्रीलंका
- 2) New Zealand
न्यूज़ीलैण्ड
- 3) Pakistan
पाकिस्तान
- 4) Australia
ऑस्ट्रेलिया

Correct Answer: Australia

ऑस्ट्रेलिया

Candidate Answer: New Zealand

न्यूज़ीलैण्ड

QID : 46 - Buland Darwaza is located in?

बुलन्द दरवाज़ा कहाँ स्थित है?

Options:

- 1) West Bengal
पश्चिम बंगाल
- 2) Gujarat
गुजरात
- 3) Uttar Pradesh
उत्तर प्रदेश
- 4) Tamil Nadu
तमिल नाडु

Correct Answer: Uttar Pradesh

उत्तर प्रदेश

Candidate Answer: Uttar Pradesh

उत्तर प्रदेश

QID : 47 - Which of the following award is given for distinguished service in any field including service rendered by the Government servants?

सरकारी कर्मचारियों द्वारा प्रदान की गई सेवा सहित किसी भी क्षेत्र में विशिष्ट सेवा के लिए निम्नलिखित में से कौन सा पुरस्कार दिया जाता है?

Options:

- 1) Ashok Chakra
अशोक चक्र
- 2) Dada Saheb Phalke Awards
दादा साहब फाल्के पुरस्कार
- 3) Arjuna Award
अर्जुन पुरस्कार
- 4) Padma Shri
पद्म श्री

Correct Answer: Padma Shri

पद्म श्री

Candidate Answer: Padma Shri

पद्म श्री

QID : 48 - Which of the statements given below are correct?

- 1. The author of 'The Great Indian Novel' is A.P.J. Abdul Kalam.
- 2. The author of 'A Foreign Policy For India' is I.K. Gujral.
- 3. 'Wings of Fire' is an Autobiography of A.P.J. Abdul Kalam.

निचे दिये गये कथनों में से कौन से कथन सही हैं?

- 1. 'द ग्रेट इन्डियन नॉवेल' के लेखक ए.पी.जे. अब्दुल कलाम हैं।
- 2. 'अ फॉरेन पॉलिसी फॉर इंडिया' के लेखक आई.के. गुजराल हैं।
- 3. 'विंग्स ऑफ़ फायर' ए.पी. जे. अब्दुल कलाम की आत्मकथा है।

Options:

- 1) 1 and 2
1 और 2
- 2) 2 and 3
2 और 3
- 3) 1 and 3
1 और 3
- 4) 1, 2 and 3
1, 2 और 3

Correct Answer: 2 and 3

2 और 3

Candidate Answer: 2 and 3

2 और 3

QID : 49 - In April 2017, diplomatic ties were re-established after 37 years between Cuba and _____.

अप्रैल 2017 में, क्यूबा और _____ के बीच 37 वर्षों के बाद कूटनीतिक संबंधों को पुनः स्थापित किया गया है।

Options:

- 1) India
भारत
- 2) Morocco
मोरक्को
- 3) Sri Lanka
श्रीलंका
- 4) USA
यूएसए

Correct Answer: Morocco

मोरक्को

Candidate Answer: [NOT ANSWERED]

QID : 50 - Nepal shares a border with which other country besides India?

नेपाल भारत के अलावा किस अन्य देश के साथ अपनी सीमा साझा करता है?

Options:

- 1) China
चीन
- 2) Bhutan
भूटान
- 3) Bangladesh
बांग्लादेश
- 4) Afghanistan
अफ़ग़ानिस्तान

Correct Answer: China

चीन

Candidate Answer: China

चीन

QID : 51 - What least number must be added to 213, so that the sum is completely divisible by 9?

वह न्यूनतम संख्या कौनसी है, जिसे 213 में जोड़े जाने पर प्राप्त योग 9 से पूरी तरह विभाजित हो जायेगा?

Options:

- 1) 3
- 2) 2
- 3) 1
- 4) 4

Correct Answer: 3

Candidate Answer: 3

QID : 52 - A can do a work in 12 days and B in 24 days. If they work on it together for 4 days, then what fraction of work is left?

A 12 दिनों में और B 24 दिनों में एक काम कर सकते हैं। यदि वे 4 दिनों के लिए एक साथ मिलकर काम करते हैं, तो काम का कितना अंश बाकी रह जायेगा?

Options:

- 1) $\frac{1}{3}$
- 2) $\frac{1}{2}$
- 3) $\frac{1}{4}$
- 4) $\frac{1}{5}$

Correct Answer: $\frac{1}{2}$

Candidate Answer: $\frac{1}{2}$

QID : 53 - What is the area (in sq cm) of an equilateral triangle of side 6 cm?

6 सें.मी भुजा वाले एक समबाहु त्रिकोण का क्षेत्रफल (वर्ग सें.मी में) क्या होगा?

Options:

- 1) $36\sqrt{3}$
- 2) 9
- 3) 36
- 4) $9\sqrt{3}$

Correct Answer: $9\sqrt{3}$

Candidate Answer: $9\sqrt{3}$

QID : 54 - What is the effective discount on two successive discounts of 20% and 25%?

20% और 25% के लगातार दो छूटों पर प्रभावी छूट क्या होगी?

Options:

1) 45%

2) 40%

3) 50%

4) 60%

Correct Answer: 40%

Candidate Answer: 40%

QID : 55 - Profit of Rs 12,400 has to be divided between three partners A, B and C in the ratio 5:7:8. How much does B get (in Rs)?

12,400 रु के लाभ को 5: 7: 8 के अनुपात में A, B और C के बीच विभाजित किया जाना है। B को कितने रु मिलेंगे?

Options:

1) 4340

2) 3440

3) 3340

4) 4430

Correct Answer: 4340

Candidate Answer: 4340

QID : 56 - The average weight of P, Q and R is 47 kg. If the average weight of P and Q be 32.5 kg and that of Q and R be 48.5 kg, then what is the weight of Q (in kgs)?

P, Q और R का औसत वजन 47 कि.ग्रा. है। यदि P और Q का औसत वजन 32.5 कि.ग्रा. और Q और R का औसत वजन 48.5 कि.ग्रा. है, तो Q का वजन (कि.ग्रा. में) क्या है?

Options:

1) 25

2) 21

3) 29

4) 33

Correct Answer: 21

Candidate Answer: 21

QID : 57 - A shopkeeper by selling 5 items, earns a profit equal to the selling price of 1 item. What is his profit percentage?

एक दुकानदार 5 वस्तु बेचकर 1 वस्तु की बिक्री मूल्य के बराबर लाभ कमाता है। उसका लाभ प्रतिशत क्या है?

Options:

1) 20%

2) 25%

3) 16%

4) 22.5%

Correct Answer: 25%

Candidate Answer: 20%

QID : 58 - What is the value of 20% of 500% of 50?

50 के 500% का 20% का मान क्या है?

Options:

1) 0.5

2) 5000

3) 500

4) 50

Correct Answer: 50

Candidate Answer: 50

QID : 59 - To cover a distance of 90 km in 2.5 hours what should be the average speed of the car in meters/second?

90 किमी की दूरी को 2.5 घंटे में तय करने के लिए मीटर/सेकंड में कार की औसत गति क्या होनी चाहिए?

Options:

1) 10

2) 20

3) 30

4) 40

Correct Answer: 10

Candidate Answer: 10

QID : 60 - If in 3 years at simple interest the principal increases by 18%, what will be the compound interest (in Rs) earned on Rs. 25,000 in 3 years at the same rate?

यदि 3 वर्षों में साधारण ब्याज पर मूलधन 18% से बढ़ जाता है, तो उसी दर पर 3 साल में 25,000 रु पर अर्जित चक्रवृद्धि ब्याज (रु में) क्या होगा?

Options:

- 1) 4775.4
- 2) 5774.4
- 3) 4557.4
- 4) 5575.4

Correct Answer: 4775.4

Candidate Answer: [NOT ANSWERED]

QID : 61 - If $5x + 6(3-2x) = 4$, then what is the value of x ?

यदि $5x + 6(3-2x) = 4$, तो x का मान क्या है?

Options:

- 1) 1
- 2) 3
- 3) 2
- 4) 4

Correct Answer: 2

Candidate Answer: 2

QID : 62 - If $a + b = 1$ and $ab = -6$, then what is the value of $a^3 + b^3$?

यदि $a + b = 1$ और $ab = -6$, तो $a^3 + b^3$ का मान क्या है?

Options:

- 1) 17
- 2) 15
- 3) 19
- 4) 13

Correct Answer: 19

Candidate Answer: 19

QID : 63 - The sum of a non-zero number and twenty times its reciprocal is 9. What is the number?

एक गैर-शून्य संख्या और इसके व्युत्क्रमानुपाती के बीस गुना का योग 9 है। तो वह संख्या क्या है?

Options:

- 1) -5
- 2) 3
- 3) -3
- 4) 5

Correct Answer: 5

Candidate Answer: 5

QID : 64 - If the 3rd and the 5th term of an arithmetic progression are 13 and 21, what is the 13th term?

यदि एक अंकगणितीय प्रगति का तीसरा और पांचवां पद 13 और 21 है, तो 13 वां पद क्या है?

Options:

- 1) 53
- 2) 49
- 3) 57
- 4) 61

Correct Answer: 53

Candidate Answer: 53

QID : 65 - What is the reflection of the point (3,-5) in the origin?

मूल में बिंदु (3, -5) का प्रतिबिंब क्या है?

Options:

- 1) (-3, -5)
- 2) (5,-3)
- 3) (-5,-3)
- 4) (-3, 5)

Correct Answer: (-3, 5)

Candidate Answer: (-3, 5)

QID : 66 - Point P is the midpoint of segment AB. Co-ordinates of P are (5, -1) and A are (2, -4). What are the co-ordinates of point B?

बिंदु P रेखाखंड AB का मध्य बिंदु है। P के निर्देशांक (5, -1) और A के निर्देशांक (2, -4) हैं। बिंदु B के निर्देशांक क्या है?

Options:

1) (6, 4)

2) (8, 2)

3) (1, -2)

4) (-6, -2)

Correct Answer: (8, 2)

Candidate Answer: (8, 2)

QID : 67 - What is the slope of the line perpendicular to the line passing through the points (-2, 3) and (2, 0)?

(-2, 3) और (2, 0) बिंदुओं के बीच से गुजरने वाली रेखा पर लम्बवत रहनेवाली रेखा का झुकाव क्या है?

Options:

1) $4/3$

2) $3/4$

3) $-3/4$

4) $-4/3$

Correct Answer: $4/3$

Candidate Answer: $4/3$

QID : 68 - $\triangle ABC$ is similar to $\triangle PQR$. If ratio of perimeters of $\triangle ABC$ and $\triangle PQR$ is 1:2 and if $PQ = 10$ cm then what is the length of AB (in cm)?

$\triangle ABC$ ये $\triangle PQR$ के समान है, यदि $\triangle ABC$ और $\triangle PQR$ के परिधियों का अनुपात 1: 2 है और यदि $PQ = 10$ सें.मी है, तो AB की लंबाई (सें.मी. में) क्या है?

Options:

1) 5

2) 20

3) 25

4) 15

Correct Answer: 5

Candidate Answer: 5

QID : 69 - What is the value of $\sin 30^\circ + \cos 30^\circ$?

$\sin 30^\circ + \cos 30^\circ$ का मान क्या है?

Options:

1) $(\sqrt{6} + 1)/\sqrt{3}$

2) $(\sqrt{3} + 2)/\sqrt{3}$

3) $(1 + \sqrt{3})/2$

4) $5/\sqrt{3}$

Correct Answer: $(1 + \sqrt{3})/2$

Candidate Answer: $(1 + \sqrt{3})/2$

QID : 70 - $\triangle ABC$ is right angled at B. If $m\angle A = 30^\circ$, then $\sec C = ?$

$\triangle ABC$ ये B पर समकोण है। अगर $m\angle A = 30^\circ$ है, तो $\sec C = ?$

Options:

1) $1/2$

2) $1/\sqrt{2}$

3) 2

4) $1/\sqrt{3}$

Correct Answer: 2

Candidate Answer: 2

QID : 71 - If $\sin \theta = 12/13$, then what is the value of $\cot \theta$?

यदि $\sin \theta = 12/13$, तो $\cot \theta$ का मान क्या है?

Options:

1) $13/12$

2) $5/13$

3) $5/12$

4) $13/5$

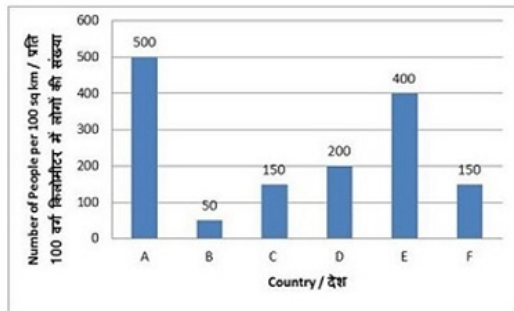
Correct Answer: $5/12$

Candidate Answer: $5/12$

QID : 72 -

The bar graph shows the population density of 6 countries.
Study the diagram and answer the following questions.

यह बार लेखचित्र 6 देशों की आबादी घनत्व को दर्शाता है। इस अरेख का अध्ययन करें और निम्नलिखित प्रश्नों के उत्तर दें।



What is the ratio of the population densities of country C to country D?

देश C से देश D की जनसंख्या घनत्व का अनुपात क्या है?

Options:

- 1) 3 : 4
- 2) 4 : 3
- 3) 5 : 4
- 4) 4 : 5

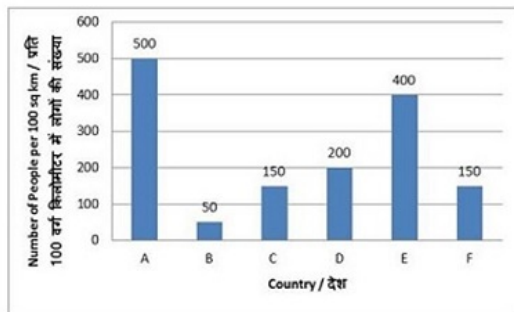
Correct Answer: 3 : 4

Candidate Answer: 3 : 4

QID : 73 -

The bar graph shows the population density of 6 countries.
Study the diagram and answer the following questions.

यह बार लेखचित्र 6 देशों की आबादी घनत्व को दर्शाता है। इस अरेख का अध्ययन करें और निम्नलिखित प्रश्नों के उत्तर दें।



What is the difference in the average number of people living per 1,000 sq km in countries E and F?

E और F देशों में प्रति 1,000 वर्ग कि.मी. में रहने वाले लोगों की औसत संख्या में अंतर कितना है?

Options:

- 1) 250
- 2) 4000
- 3) 400
- 4) 2500

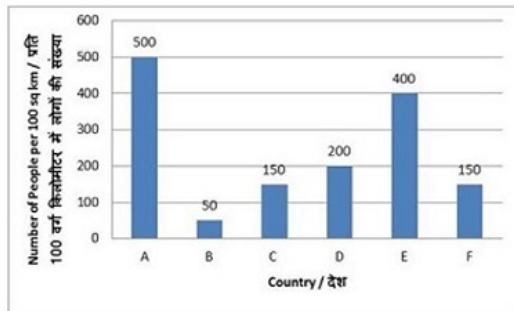
Correct Answer: 2500

Candidate Answer: 2500

QID : 74 -

The bar graph shows the population density of 6 countries.
Study the diagram and answer the following questions.

यह बार लेखचित्र 6 देशों की आबादी घनत्व को दर्शाता है। इस अरेख का अध्ययन करें और निम्नलिखित प्रश्नों के उत्तर दें।



Population density of country E is greater than population density of country D by:

देश E की जनसंख्या घनत्व देश D के जनसंख्या घनत्व से कितनी अधिक है?

Options:

- 1) 50%
- 2) 100%
- 3) 200%
- 4) 300%

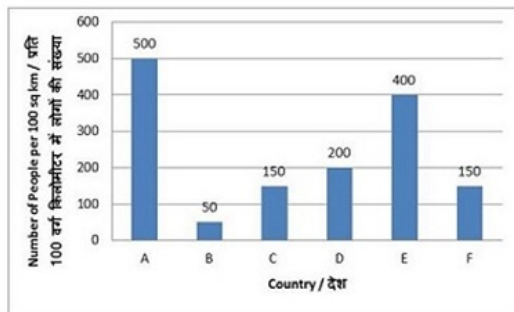
Correct Answer: 100%

Candidate Answer: 100%

QID : 75 -

The bar graph shows the population density of 6 countries.
Study the diagram and answer the following questions.

यह बार लेखचित्र 6 देशों की आबादी घनत्व को दर्शाता है। इस अरेख का अध्ययन करें और निम्नलिखित प्रश्नों के उत्तर दें।



If area of country B is 20,00,000 sq km, what is its population?

यदि देश B का क्षेत्रफल 20,00,000 वर्ग कि.मी. है, तो इसकी जनसंख्या कितनी है?

Options:

- 1) 10000000
- 2) 2500000
- 3) 25000000
- 4) 1000000

Correct Answer: 1000000

Candidate Answer: 1000000

QID : 76 - In the following question, some part of the sentence may have errors. Find out which part of the sentence has an error and select the appropriate option.
If a sentence is free from error, select 'No Error'.

The phone that (1)/my father bought is different (2)/than your.(3)/No Error (4)

Options:

- 1) 1
- 2) 2
- 3) 3
- 4) 4

Correct Answer: 3

Candidate Answer: 3

QID : 77 - In the following question, some part of the sentence may have errors. Find out which part of the sentence has an error and select the appropriate option. If a sentence is free from error, select 'No Error'.

As soon as (1)/I reach my office (2)/I will mail you the files.(3)/No Error (4)

Options:

- 1) 1
- 2) 2
- 3) 3
- 4) 4

Correct Answer: 4

Candidate Answer: 2

QID : 78 - In the following question, the sentence given with blank to be filled in with an appropriate word. Select the correct alternative out of the four and indicate it by selecting the appropriate option.

Because she had a _____ demeanour, she was a desirable friend.

Options:

- 1) pleasant
- 2) severe
- 3) mean
- 4) nasty

Correct Answer: pleasant

Candidate Answer: pleasant

QID : 79 - In the following question, the sentence given with blank to be filled in with an appropriate word. Select the correct alternative out of the four and indicate it by selecting the appropriate option.

If your child has not met the _____ vaccination requirements, he or she will not be allowed to attend public school.

Options:

- 1) optional
- 2) referral
- 3) compulsory
- 4) guideline

Correct Answer: compulsory

Candidate Answer: compulsory

QID : 80 - In the following question, out of the four alternatives, select the word similar in meaning to the word given.

Stymie

Options:

- 1) Explicate
- 2) Abet
- 3) Impede
- 4) Aid

Correct Answer: Impede

Candidate Answer: [NOT ANSWERED]

QID : 81 - In the following question, out of the four alternatives, select the word similar in meaning to the word given.

Suffix

Options:

- 1) Addition
- 2) Basic
- 3) Root
- 4) Focal

Correct Answer: Addition

Candidate Answer: Addition

QID : 82 - In the following question, out of the four alternatives, select the word opposite in meaning to the word given.

Sultry

Options:

- 1) Frigid
- 2) Muggy
- 3) Sticky
- 4) Soggy

Correct Answer: Frigid

Candidate Answer: Frigid

QID : 83 - In the following question, out of the four alternatives, select the word opposite in meaning to the word given.

Supple

Options:

- 1) Flexible
- 2) Brittle
- 3) Pliable
- 4) Bending

Correct Answer: Brittle

Candidate Answer: Pliable

QID : 84 - In the following question, out of the four alternatives, select the alternative which best expresses the meaning of the idiom/phrase.

Barking up the wrong tree

Options:

- 1) Scolding the one who is innocent.
- 2) Expecting a favour from a heartless person.
- 3) Looking in the wrong place.
- 4) Requesting but in an arrogant manner.

Correct Answer: Looking in the wrong place.

Candidate Answer: [NOT ANSWERED]

QID : 85 - In the following question, out of the four alternatives, select the alternative which best expresses the meaning of the idiom/phrase.

Call it a day

Options:

- 1) To start a job wishing for success.
- 2) To take a break or a holiday.
- 3) Assign different days to different tasks.
- 4) To declare the end of a task.

Correct Answer: To declare the end of a task.

Candidate Answer: To declare the end of a task.

QID : 86 - In the following question, out of the four alternatives, select the alternative which will improve the bracketed part of the sentence. In case no improvement is needed, select "no improvement".

Would you mind **(to carrying)** this bag for me.

Options:

- 1) to carry
- 2) carrying
- 3) carry
- 4) no improvement

Correct Answer: carrying

Candidate Answer: carrying

QID : 87 - In the following question, out of the four alternatives, select the alternative which will improve the bracketed part of the sentence. In case no improvement is needed, select "no improvement".

The child **(would have jumped)** with delight on seeing the joker at the circus.

Options:

- 1) jumping
- 2) jumped
- 3) to jump
- 4) no improvement

Correct Answer: jumped

Candidate Answer: jumped

QID : 88 - In the following question, out of the four alternatives, select the alternative which is the best substitute of the words/sentence.

The quality or state of being exposed to the possibility of being attacked or harmed

Options:

- 1) Vigour
- 2) Vulnerability
- 3) Fortitude
- 4) Clout

Correct Answer: Vulnerability

Candidate Answer: Vulnerability

QID : 89 - In the following question, out of the four alternatives, select the alternative which is the best substitute of the words/sentence.

A solemn promise or undertaking

Options:

- 1) Pledge
- 2) Deceit
- 3) Myth
- 4) Perjury

Correct Answer: Pledge

Candidate Answer: Pledge

QID : 90 - In the following question, four words are given out of which one word is correctly spelt. Select the correctly spelt word.

Options:

- 1) consenssus
- 2) concensus
- 3) concenssus
- 4) consensus

Correct Answer: consensus

Candidate Answer: concensus

QID : 91 - In the following question, four words are given out of which one word is correctly spelt. Select the correctly spelt word.

Options:

- 1) presedents
- 2) pricedents
- 3) precedents
- 4) prisedents

Correct Answer: precedents

Candidate Answer: precedents

QID : 92 - The question below consists of a set of labelled sentences. Out of the four options given, select the most logical order of the sentences to form a coherent paragraph.

They had been thrown

X-upon their own exertions at an

Y-battle to fight with poverty and ignorance

Z-early age, and had a hard

Options:

- 1) XZY
- 2) YXZ
- 3) ZYX
- 4) XYZ

Correct Answer: XZY

Candidate Answer: XZY

QID : 93 - The question below consists of a set of labelled sentences. Out of the four options given, select the most logical order of the sentences to form a coherent paragraph.

The unstated assumption is

X-conceding spatial autonomy

Y-that the grant of a different time

Z-zone is only the first temporal step towards

Options:

- 1) ZXY
- 2) XZY
- 3) YXZ
- 4) YZX

Correct Answer: YZX

Candidate Answer: YZX

QID : 94 - In the following question, a sentence has been given in Active/Passive voice. Out of the four alternatives suggested, select the one which best expresses the same sentence in Passive/Active voice.

My friends are going to watch a movie tonight.

Options:

- 1) A movie is going to be watched by my friends tonight.
- 2) My friends will have watch a movie by tonight.
- 3) A movie was going to be watched by my friends tonight.
- 4) My friends will have to watch a movie by tonight.

Correct Answer: A movie is going to be watched by my friends tonight.

Candidate Answer: A movie is going to be watched by my friends tonight.

QID : 95 - In the following question, a sentence has been given in Direct/Indirect speech. Out of the four alternatives suggested, select the one which best expresses the same sentence in Indirect/Direct speech.

"What time does the flight arrive?" she asked the receptionist.

Options:

- 1) She asked the receptionist what time the flight arrived.
- 2) She asked the receptionist what time the flight arrive.
- 3) She asked the receptionist when does the flight arrive.
- 4) She asked the receptionist what was going to be the time for the flights arrival.

Correct Answer: She asked the receptionist what time the flight arrived.

Candidate Answer: She asked the receptionist what time the flight arrived.

QID : 96 - A passage is given with 5 questions following it. Read the passage carefully and choose the best answer to each question out of the four alternatives.

Due to poor rainfall over the past few months, the vadu mangai season is expected to be short this year. There are two distinct varieties available in the vicinity of Coimbatore. The closest to Coimbatore, and the one that appears in the markets first, is the Thadagam variety. The second and more popular variety is the one from the Thirumoorthy Hills, near Udumalpet. Representatives from commercial pickle brands whisk these mangais away in big lots directly from the wholesalers. Only a small portion of the year's harvest trickles down to the local markets.

Small vendors bring sacks full of these tiny tender mangoes to one particular street corner in Ram Nagar during the season. The corner of Rajaji Road and Sathyamurthy Road plays host to these vendors from as early as 7.00 am every day. Depending on the quantity they have, the mangais are available until around 11.00 am. If the vendors have a good day and their produce is sold quickly, they pack up and leave even as early as 9.00 am.

What do you think 'Thadagam' is from the passage?

Options:

- 1) A Festival celebrated in Coimbatore.
- 2) A variety of vadu mangai mangoes.
- 3) A word for 'monsoon' in the local language.
- 4) A variety of mango pickle.

Correct Answer: A variety of vadu mangai mangoes.

Candidate Answer: A variety of vadu mangai mangoes.

QID : 97 - A passage is given with 5 questions following it. Read the passage carefully and choose the best answer to each question out of the four alternatives.

Due to poor rainfall over the past few months, the vadu mangai season is expected to be short this year. There are two distinct varieties available in the vicinity of Coimbatore. The closest to Coimbatore, and the one that appears in the markets first, is the Thadagam variety. The second and more popular variety is the one from the Thirumoorthy Hills, near Udumalpet. Representatives from commercial pickle brands whisk these mangais away in big lots directly from the wholesalers. Only a small portion of the year's harvest trickles down to the local markets.

Small vendors bring sacks full of these tiny tender mangoes to one particular street corner in Ram Nagar during the season. The corner of Rajaji Road and Sathyamurthy Road plays host to these vendors from as early as 7.00 am every day. Depending on the quantity they have, the mangais are available until around 11.00 am. If the vendors have a good day and their produce is sold quickly, they pack up and leave even as early as 9.00 am.

Why do local markets get only a small portion of the mango produce?

Options:

- 1) Commercial pickle companies buy the mangoes in huge quantities.
- 2) The mangoes get sold as quickly as 9.00 am.
- 3) There are only three vendors in the local market.
- 4) The sellers of the local market are just small vendors.

Correct Answer: Commercial pickle companies buy the mangoes in huge quantities.

Candidate Answer: Commercial pickle companies buy the mangoes in huge quantities.

QID : 98 - A passage is given with 5 questions following it. Read the passage carefully and choose the best answer to each question out of the four alternatives.

Due to poor rainfall over the past few months, the vadu mangai season is expected to be short this year. There are two distinct varieties available in the vicinity of Coimbatore. The closest to Coimbatore, and the one that appears in the markets first, is the Thadagam variety. The second and more popular variety is the one from the Thirumoorthy Hills, near Udumalpet. Representatives from commercial pickle brands whisk these mangais away in big lots directly from the wholesalers. Only a small portion of the year's harvest trickles down to the local markets.

Small vendors bring sacks full of these tiny tender mangoes to one particular street corner in Ram Nagar during the season. The corner of Rajaji Road and Sathyamurthy Road plays host to these vendors from as early as 7.00 am every day. Depending on the quantity they have, the mangais are available until around 11.00 am. If the vendors have a good day and their produce is sold quickly, they pack up and leave even as early as 9.00 am.

What may happen if there is adequate rainfall?

Options:

- 1) Local vendors will get fewer mangoes.
- 2) The vadu mangai season will be longer that year.
- 3) Commercial pickle companies will buy in smaller quantities.
- 4) Vendors will be able to sell quickly.

Correct Answer: The vadu mangai season will be longer that year.

Candidate Answer: The vadu mangai season will be longer that year.

QID : 99 - A passage is given with 5 questions following it. Read the passage carefully and choose the best answer to each question out of the four alternatives.

Due to poor rainfall over the past few months, the vadu mangai season is expected to be short this year. There are two distinct varieties available in the vicinity of Coimbatore. The closest to Coimbatore, and the one that appears in the markets first, is the Thadagam variety. The second and more popular variety is the one from the Thirumoorthy Hills, near Udumalpet. Representatives from commercial pickle brands whisk these mangais away in big lots directly from the wholesalers. Only a small portion of the year's harvest trickles down to the local markets.

Small vendors bring sacks full of these tiny tender mangoes to one particular street corner in Ram Nagar during the season. The corner of Rajaji Road and Sathyamurthy Road plays host to these vendors from as early as 7.00 am every day. Depending on the quantity they have, the mangais are available until around 11.00 am. If the vendors have a good day and their produce is sold quickly, they pack up and leave even as early as 9.00 am.

The more popular vadu mangai mangoes are from:

Options:

- 1) Udumalpet
- 2) Coimbatore
- 3) Thirumoorthy Hills
- 4) Ram Nagar

Correct Answer: Thirumoorthy Hills

Candidate Answer: Thirumoorthy Hills

QID : 100 - A passage is given with 5 questions following it. Read the passage carefully and choose the best answer to each question out of the four alternatives.

Due to poor rainfall over the past few months, the vadu mangai season is expected to be short this year. There are two distinct varieties available in the vicinity of Coimbatore. The closest to Coimbatore, and the one that appears in the markets first, is the Thadagam variety. The second and more popular variety is the one from the Thirumoorthy Hills, near Udumalpet. Representatives from commercial pickle brands whisk these mangais away in big lots directly from the wholesalers. Only a small portion of the year's harvest trickles down to the local markets.

Small vendors bring sacks full of these tiny tender mangoes to one particular street corner in Ram Nagar during the season. The corner of Rajaji Road and Sathyamurthy Road plays host to these vendors from as early as 7.00 am every day. Depending on the quantity they have, the mangais are available until around 11.00 am. If the vendors have a good day and their produce is sold quickly, they pack up and leave even as early as 9.00 am.

Which of the following best describes the vadu mangai mangoes?

Options:

- 1) Big and juicy
- 2) Orange but raw
- 3) Tiny and tender
- 4) Sour and sweet

Correct Answer: Tiny and tender

Candidate Answer: Big and juicy